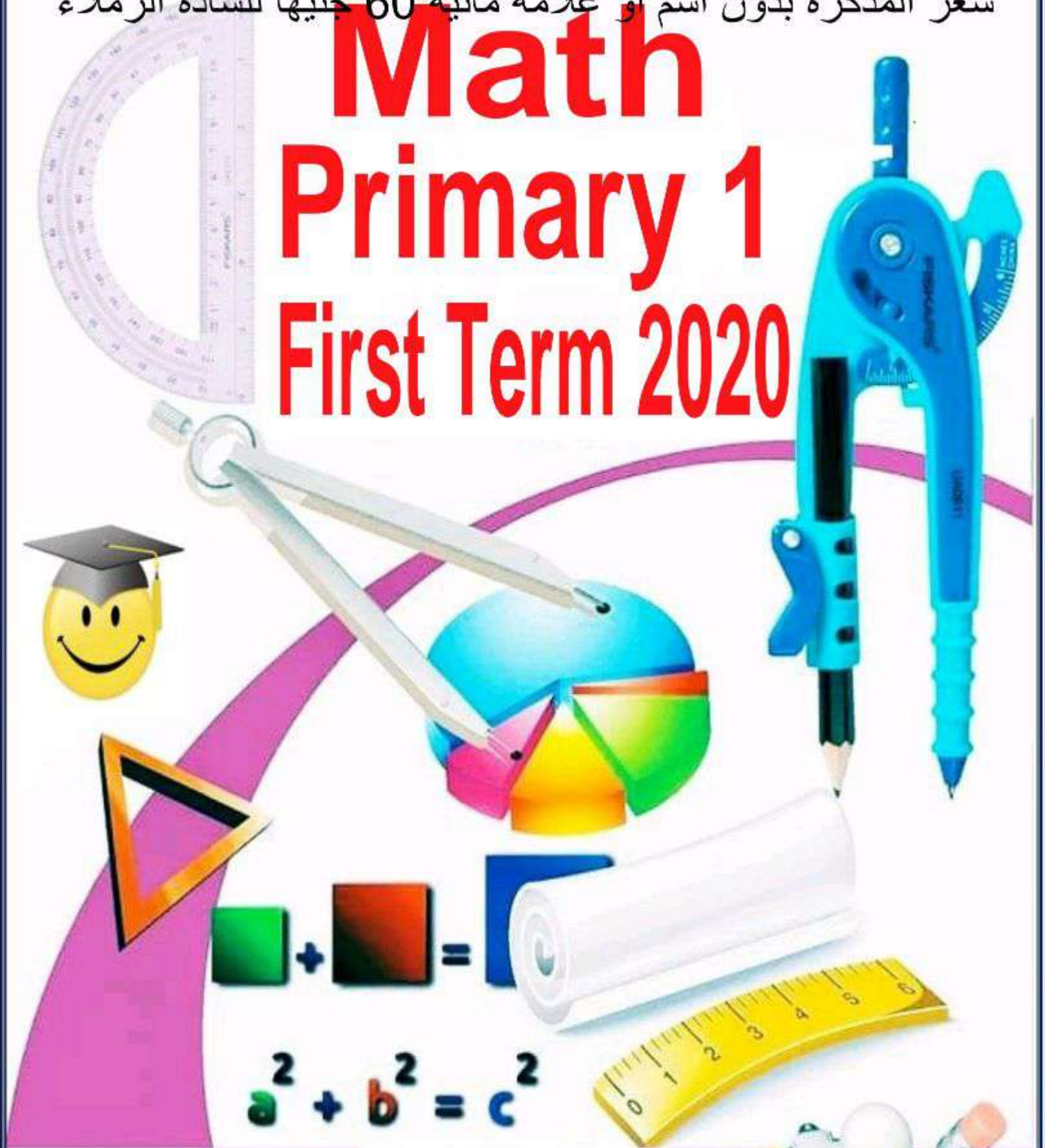


سعر المذكرة بدون اسم أو علامة مائبة 60 جنيهاً للسادة الزملاء

Math Primary 1 First Term 2020



أ / أيمن جابر كامل

٠١٠٢٢٧٤٤٠٨٦

01022744086

أ / أيمن جابر كامل


سعر المذكرة بدون اسم أو علامة مائة 60 جنيهاً للسادة الزملاء

Number 0



★ Look, write and colour:

| | | | |
|-------|-------|-------|-------|
| Zero | Zero | 0 | 0 |
| | | | |
| | | | |



★ Look and think:

What is in this plate ?


.....



★ Look and think:

How many eggs with the chicken ???

.....



01022744086

سعر المذكرة بدون اسم أو علامة مائة 60 جنيهاً للسادة الزملاء



One

★ Look, write and colour:

| | | | |
|-------|-------|-------|-------|
| One | One | 1 | 1 |
| | | | |
| | | | |



∴ Think and focus:

How many balls are there?

There are

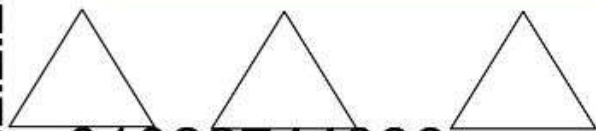


How many boys are there?

There are



★ Colour one triangle:



★ Colour one star:



01022744086

سعر المذكرة بدون اسم أو علامة مائية 60 جنيهاً للسادة الزملاء



★ Look, write and colour:

| | | | |
|-------|-------|-------|-------|
| Two | Two | 2 | 2 |
| | | | |
| | | | |



★ Count and colour:



★ Write in digits:


Two



.....

01022744086


سعر المذكرة بدون اسم أو علامة مائة 60 جنيهاً للسادة الزملاء



3


Three

★ Colour three apples:

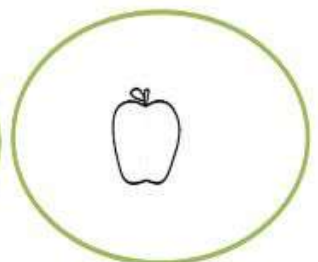
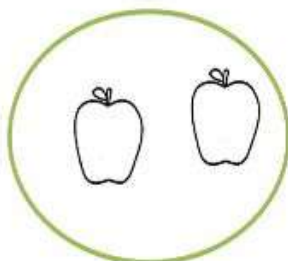


★ Look, write and colour:

| | | | |
|-------|-------|-------|-------|
| Three | Three | 3 | 3 |
| | | | |
| | | | |



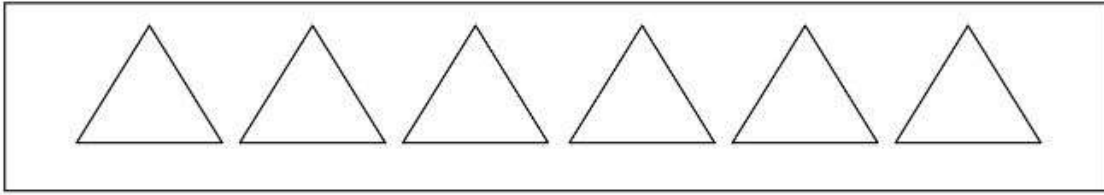
★ Count and complete:




01022744086

سعر المذكرة بدون اسم أو علامة مائية 60 جنيهاً للسادة الزملاء

★ Colour one using red, two using yellow and three using green:




★ Count and complete:




★ Draw according to the given number:



Two (2)




One (1)



Three (3)

★ Count and match:



(2)

01022744086

(3)



6

(1)

أ / أيمن جابر كامل

سعر المذكرة بدون اسم أو علامة مائبة 60 جنيهاً للسادة الزملاء

★ Count and match:




★ Count and circle the correct number:



1 2 3




1 2 3



1 2 3

★ Count and match:



01022744086

7

أ / أيمن جابر كامل

سعر المذكرة بدون اسم أو علامة مائة 60 جنيهاً للسادة الزملاء

★ **Look and match:**



★ **Match the same sizes:**




01022744086



أ / أيمن جابر كامل


سعر المذكرة بدون اسم أو علامة مائبة 60 جنيهاً للسادة الزملاء

• • 4 Four



★ Look, write and colour:

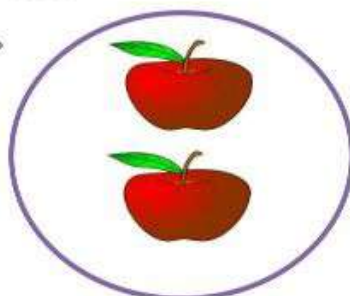
| | | | |
|-------|-------|-------|-------|
| Four | Four | 4 | 4 |
| | | | |
| | | | |



★ Count and write the number:



.....



.....




.....

01022744086


أ / أيمن جابر كامل

سعر المذكرة بدون اسم أو علامة مائبة 60 جنيهاً للسادة الزملاء

★ Circle four items:



★ Count and match:



2

4

3

1

★ Count and match:




2

3

1

4




01022744086

سعر المذكرة بدون اسم أو علامة مائة 60 جنيهاً للسادة الزملاء

★ Colour according to the given number:



4

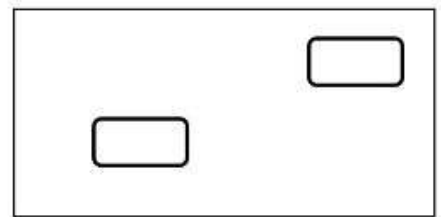
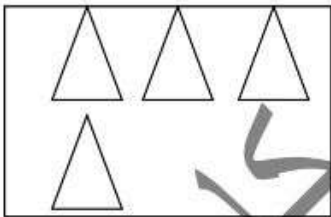


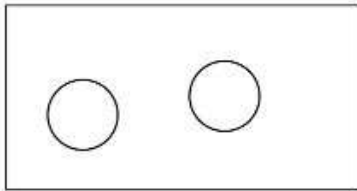


2



3

★ Join the equal sets:



★ Write in letters:

1 _ _ _ _ _

2 _ _ _ _ _


3 _ _ _ _ _

4 _ _ _ _ _



01022744086



سعر المذكرة بدون اسم أو علامة مائة 60 جنيهاً للسادة الزملاء



Five


★ Look, write and colour:

| | | | |
|-------|-------|-------|-------|
| Five | Five | 5 | 5 |
| | | | |
| | | | |



5

Five




01022744086



4

Four



3

Three



2

Two



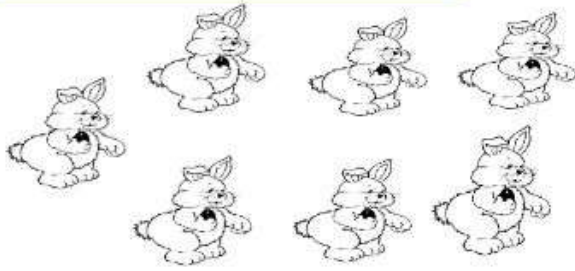
1

One



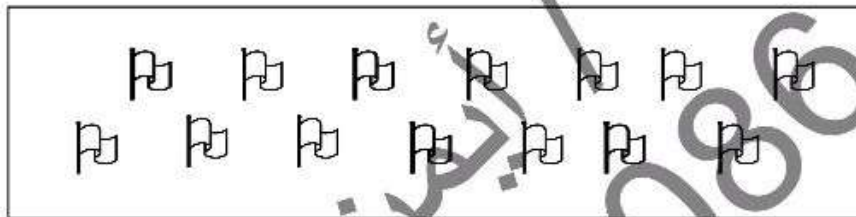
سعر المذكرة بدون اسم أو علامة مائية 60 جنيهاً للسادة الزملاء

Colour five rabbits:



Draw five flowers:

★ **Colour five flags using red, four using yellow, three using green and two using blue:**



★ **Complete:**

1- He has ears.

2- He has nose.



Forward




1




2



3



4



5




1




2



3



4



5

Backward


01022744086

13


أ / أيمن جابر كامل

سعر المذكرة بدون اسم أو علامة مائة 60 جنيهاً للسادة الزملاء

★ Circle according to the given number:



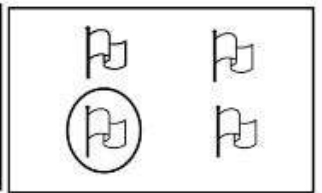
3



4


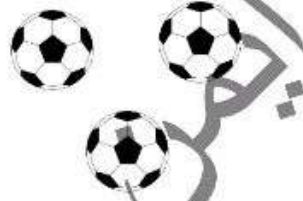



5





1

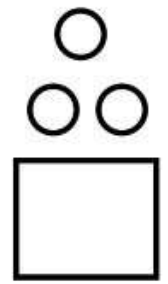
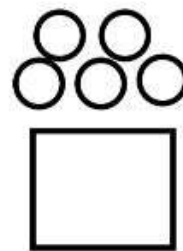
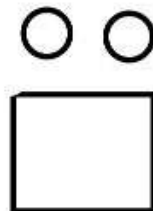
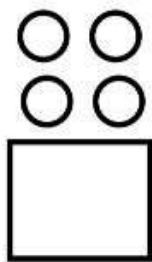
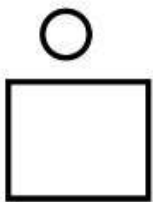
★ Circle the greatest set:



★ Circle the smallest set:



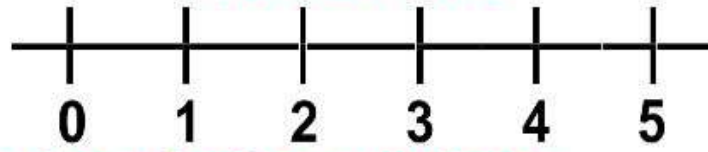
★ Count and complete:



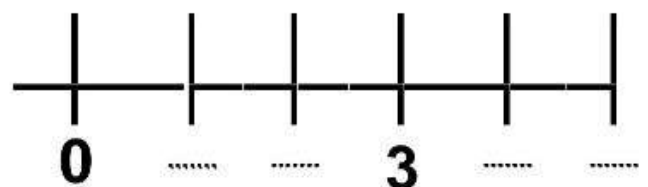
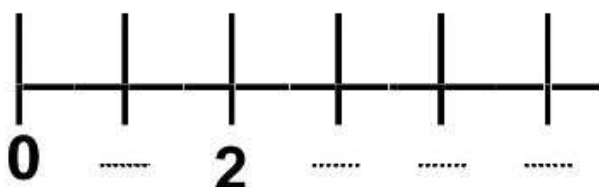
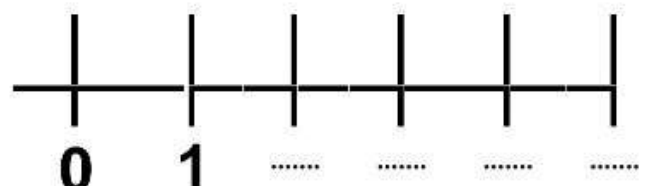
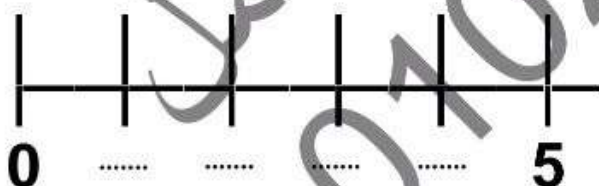
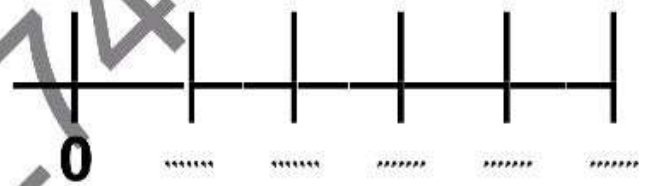
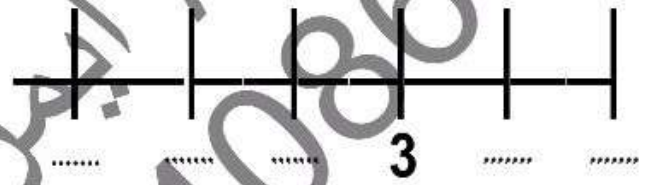
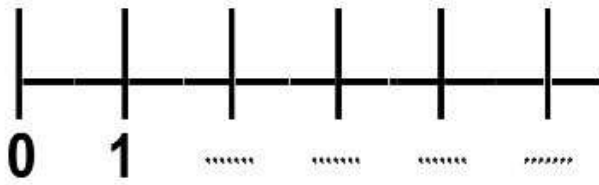
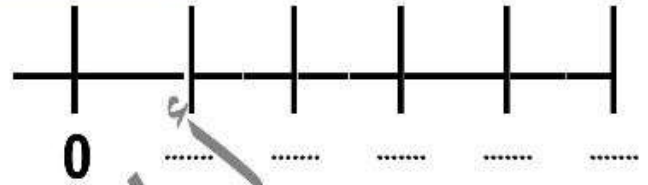

01022744086

سعر المذكرة بدون اسم أو علامة مائة 60 جنيهاً للسادة الزملاء

Number line



★ **Complete the missing numbers:**






سعر المذكرة بدون اسم أو علامة مائبة 60 جنيهاً للسادة الزملاء

Six 6



★ Look, write and colour:

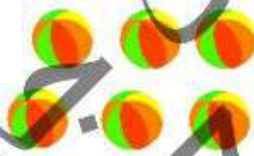


| | | | |
|-------|-------|-------|-------|
| Six | Six | 6 | 6 |
| | | | |
| | | | |



01022744086

سعر المذكرة بدون اسم أو علامة مائة 60 جنيهاً للسادة الزملاء


★ Count and write the number in letters:




01022744086

سعر المذكرة بدون اسم أو علامة مائبة 60 جنيهاً للسادة الزملاء


★ Draw stars according to the given number:



6

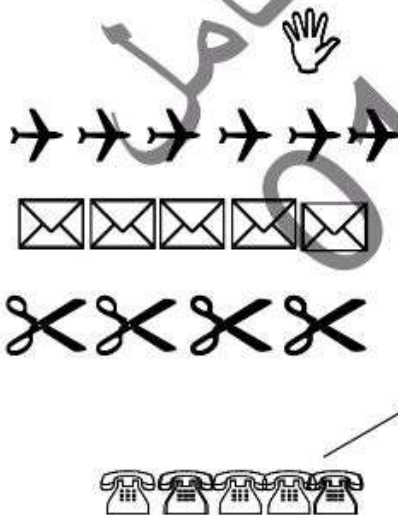


4

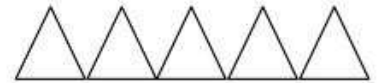


5

★ Count and match:



4



5



6



01022744086

سعر المذكرة بدون اسم أو علامة مائبة 60 جنيهاً للسادة الزملاء

Seven 7

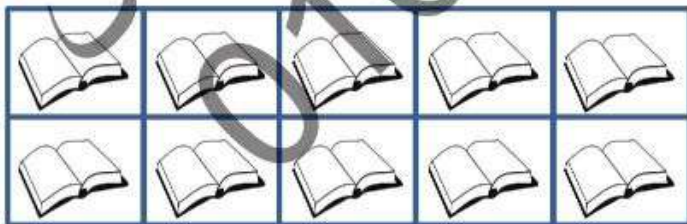


★ Look, write and colour:

| | | | |
|-------|-------|-------|-------|
| Seven | Seven | 7 | 7 |
| | | | |
| | | | |



★ Colour seven items:



★ There are ducks.



01022744086

سعر المذكرة بدون اسم أو علامة مائة 60 جنيهاً للسادة الزملاء



★ Count and match:




5




4



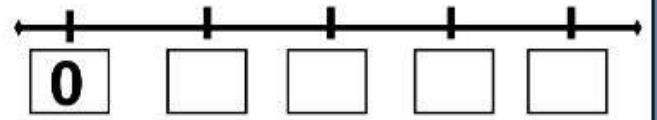
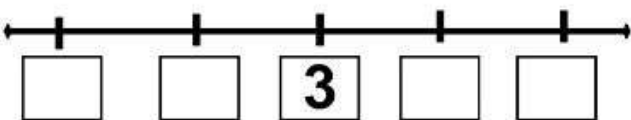
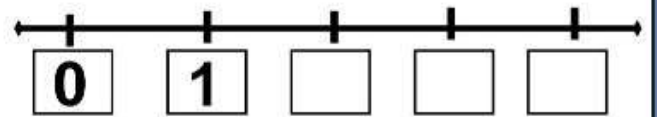
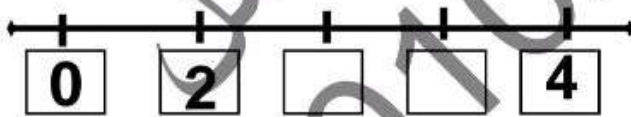
7



6



★ Complete the missing numbers:



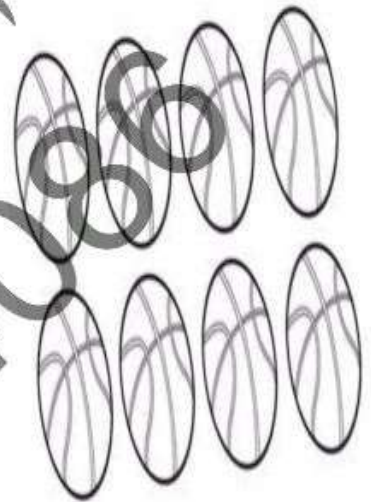
سعر المذكرة بدون اسم أو علامة مائية 60 جنيهاً للسادة الزملاء

Eight 8





★ Look, write and colour:

| | | | |
|-------|-------|-------|-------|
| Eight | Eight | 8 | 8 |
| | | | |
| | | | |



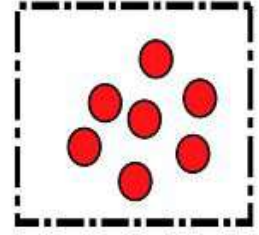
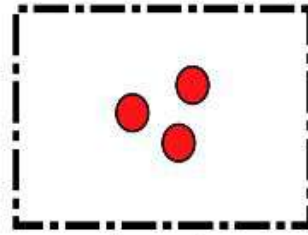
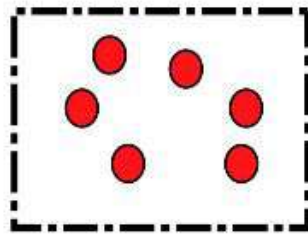

★ Form sets of eight items:




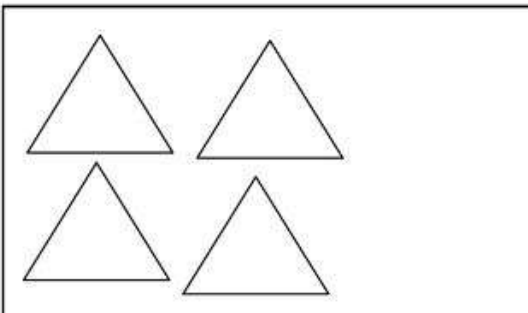
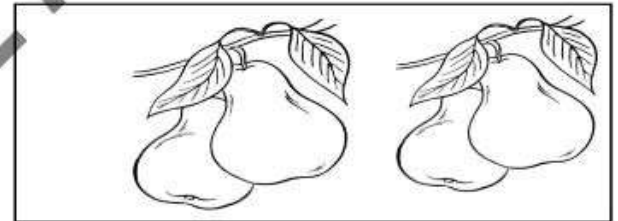
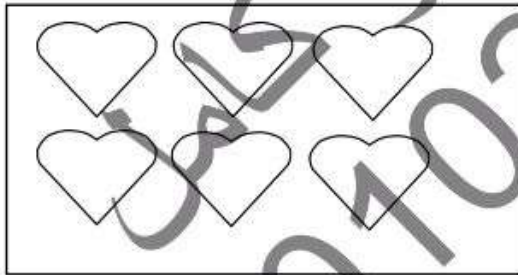

01022744086

سعر المذكرة بدون اسم أو علامة مائية 60 جنيهاً للسادة الزملاء

★ Count and complete:




★ Join / match the equal sets:



01022744086


سعر المذكرة بدون اسم أو علامة مائة 60 جنيهاً للسادة الزملاء

9 Nine

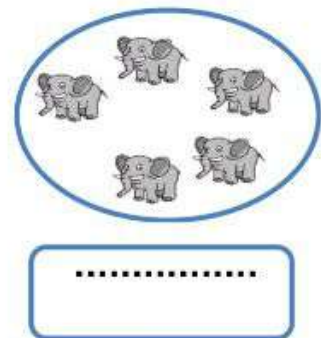
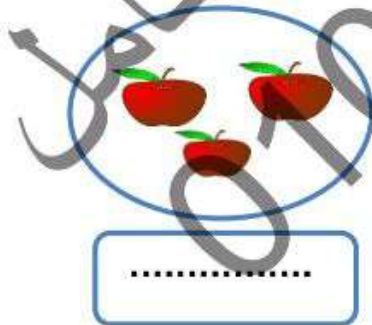


★ Look, write and colour:


| | | | |
|-------|-------|-------|-------|
| Nine | Nine | 9 | 9 |
| | | | |
| | | | |



★ Count and write the number in letters:



★ Colour nine flowers:



01022744086

سعر المذكرة بدون اسم أو علامة مائة 60 جنيهاً للسادة الزملاء

★ Look, read and write:



4

5

6

7

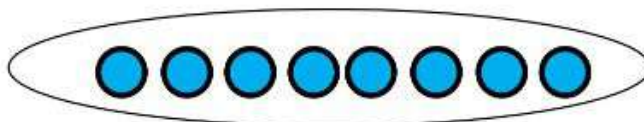
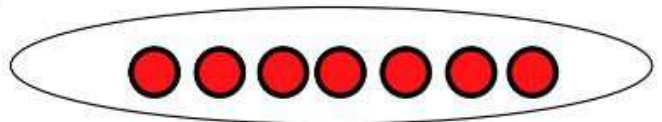
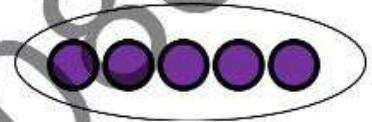
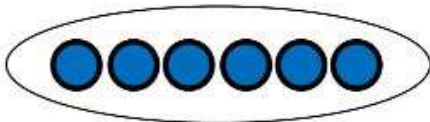
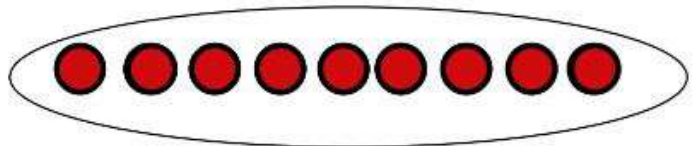
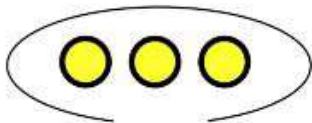
8

9

01022744086

سعر المذكرة بدون اسم أو علامة مائبة 60 جنيهاً للسادة الزملاء

★ Count and complete:



01022744086

25

أ / أيمن جابر كامل

سعر المذكرة بدون اسم أو علامة مائية 60 جنيهاً للسادة الزملاء

★ Count and match:

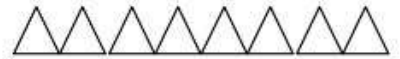


7

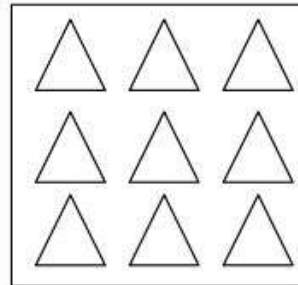
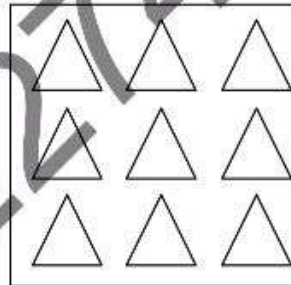
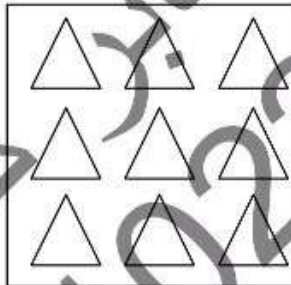
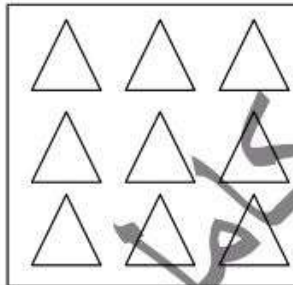


8

9



★ Colour according to the given number:



4

7

6

9

★ Read, think and complete:

1- The number just after 6 is

2- The number just before 2 is



سعر المذكرة بدون اسم أو علامة مائة 60 جنيهاً للسادة الزملاء

★ Read, think and complete:

1- 1, 2, 3,,,, 7

2- 8, 7, 6,,,, 2

3- The number just after 1 is

4- The number just before 4 is

5- The number just after 6 is

6- The number just before 5 is

7- The number just after 3 is

8- The number just before 9 is



★ Read, think, count and write how many letter the word has?

Asmaa

Dina










Ayman

Kareem

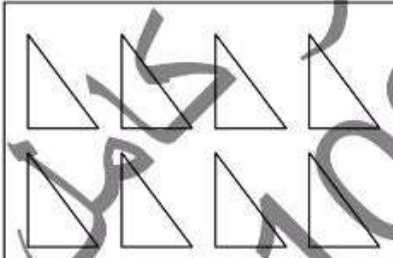
01022744086


سعر المذكرة بدون اسم أو علامة مائة 60 جنيهاً للسادة الزملاء

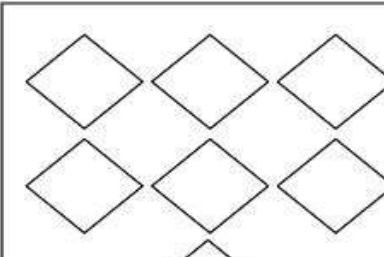
★ Count and match:

| | | |
|-------|---|---|
| Four | 1 |  |
| Nine | 2 |  |
| Seven | 3 |  |
| One | 4 |  |
| Three | 5 |  |
| Five | 6 |  |
| Two | 7 |  |
| Six | 8 |  |
| Eight | 9 |  |

★ Count and circle the correct number:

| | | |
|---|---|---|
|  | | |
| 9 | 8 | 7 |


| | | |
|--|---|---|
|  | | |
| 9 | 8 | 7 |

| | | |
|--|---|---|
|  | | |
| 9 | 8 | 7 |

01022744086

سعر المذكرة بدون اسم أو علامة مائبة 60 جنيهاً للسادة الزملاء

10 Ten



★ Look, write and colour:

| | | | |
|-------|-------|-------|-------|
| Ten | Ten | 10 | 10 |
| | | | |
| | | | |



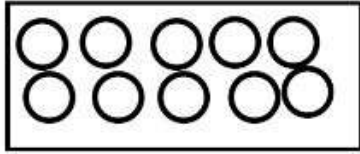
★ Draw and colour ten stars:



01022744086

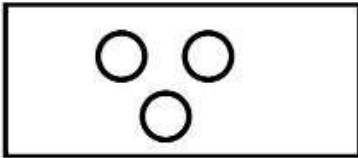
سعر المذكرة بدون اسم أو علامة مائبة 60 جنيهاً للسادة الزملاء

★ **Count and match:**



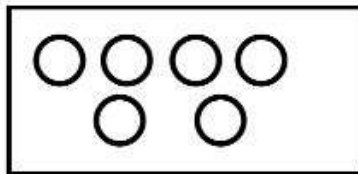
3

Four



5

Ten



10

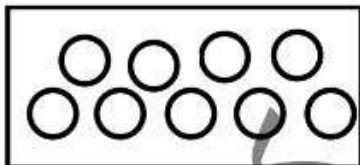
Seven

Three



2

Eight




9

Nine



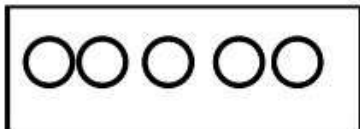
8

Five




7

Two



6

Six



4

01022744086

سعر المذكرة بدون اسم أو علامة مائة 60 جنيهاً للسادة الزملاء

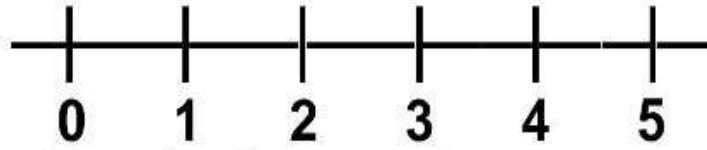
★ Complete the table:

| | | | | | | | | | |
|------------|----------------|----------------|----------------|----------------|----------------|----------------|----------------|----------------|----------------|
| 0 Zero | | | | | | | | | |
| 1 One | | | | | | | | | |
| 2 Two | | | | | | | | | |
| 3 Three | | | | | | | | | |
| 4 Four | | | | | | | | | |
| 5 Five | | | | | | | | | |
| 6 Six | | | | | | | | | |
| 7 Seven | | | | | | | | | |
| 8 Eight | | | | | | | | | |
| 9 Nine | | | | | | | | | |
| 10 Ten | | | | | | | | | |

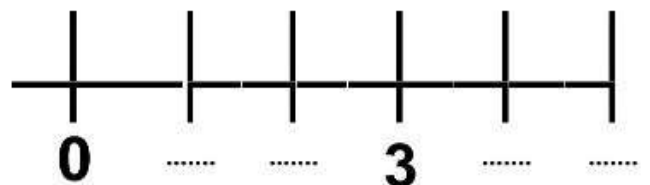
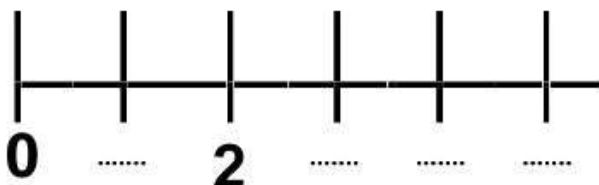
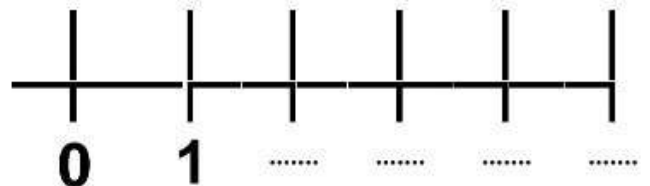
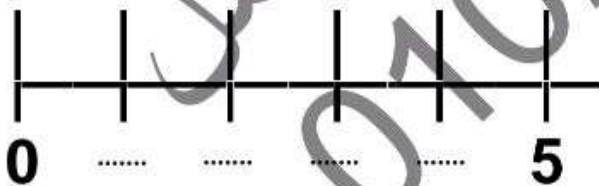
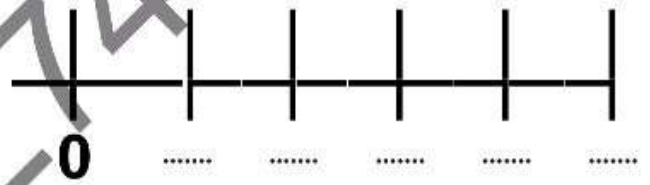
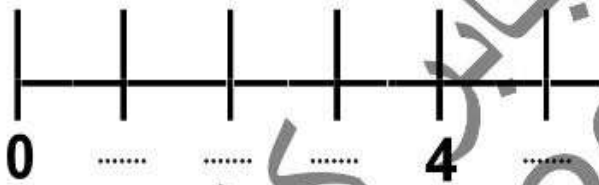
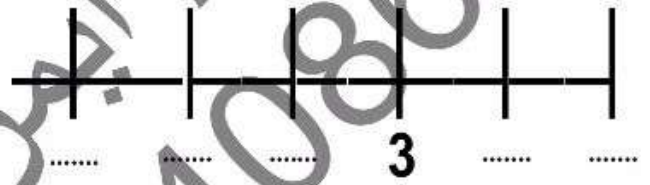
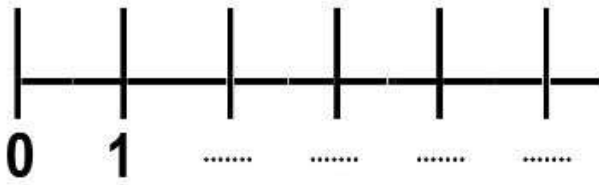
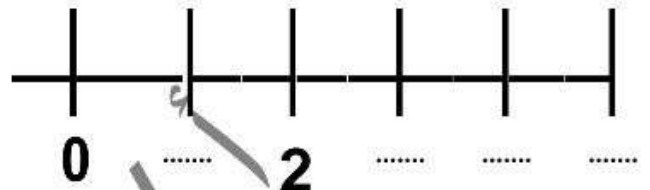
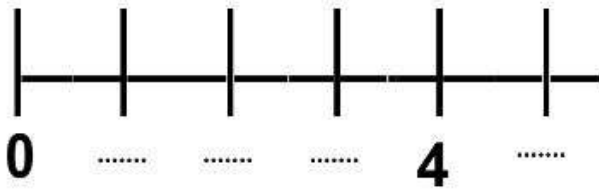
01022744086

سعر المذكرة بدون اسم أو علامة مائة 60 جنيهاً للسادة الزملاء

Number line



★ Complete the missing numbers:



01022744086

سعر المذكرة بدون اسم أو علامة مائة 60 جنيهاً للسادة الزملاء

★ Complete in the same pattern:

| | | | | | | | | | |
|----|--|--|---|--|---|---|---|--|----|
| 10 | | | | | 5 | | | | 1 |
| 10 | | | 7 | | | | | | 1 |
| 10 | | | | | | | 3 | | 1 |
| 10 | | | | | | 4 | | | 1 |
| | | | 6 | | | | | | 0 |
| 9 | | | | | | | | | 0 |
| | | | | | | | | | 10 |
| 0 | | | | | 5 | | | | |
| 1 | | | | | | | | | 10 |

01022744086

سعر المذكرة بدون اسم أو علامة مائة 60 جنيهاً للسادة الزملاء

★ Look and write in (digits and letters) the number:



.....



.....



.....



.....

01022744086

سعر المذكرة بدون اسم أو علامة مائة 60 جنيهاً للسادة الزملاء

★ Write the number just before:

| | | |
|---------|---------|---------|
| 9 | 1 | 6 |
| 8 | 0 | 4 |
| 1 | 8 | 2 |
| 5 | 6 | 9 |
| 3 | 4 | 7 |
| 6 | 2 | 5 |

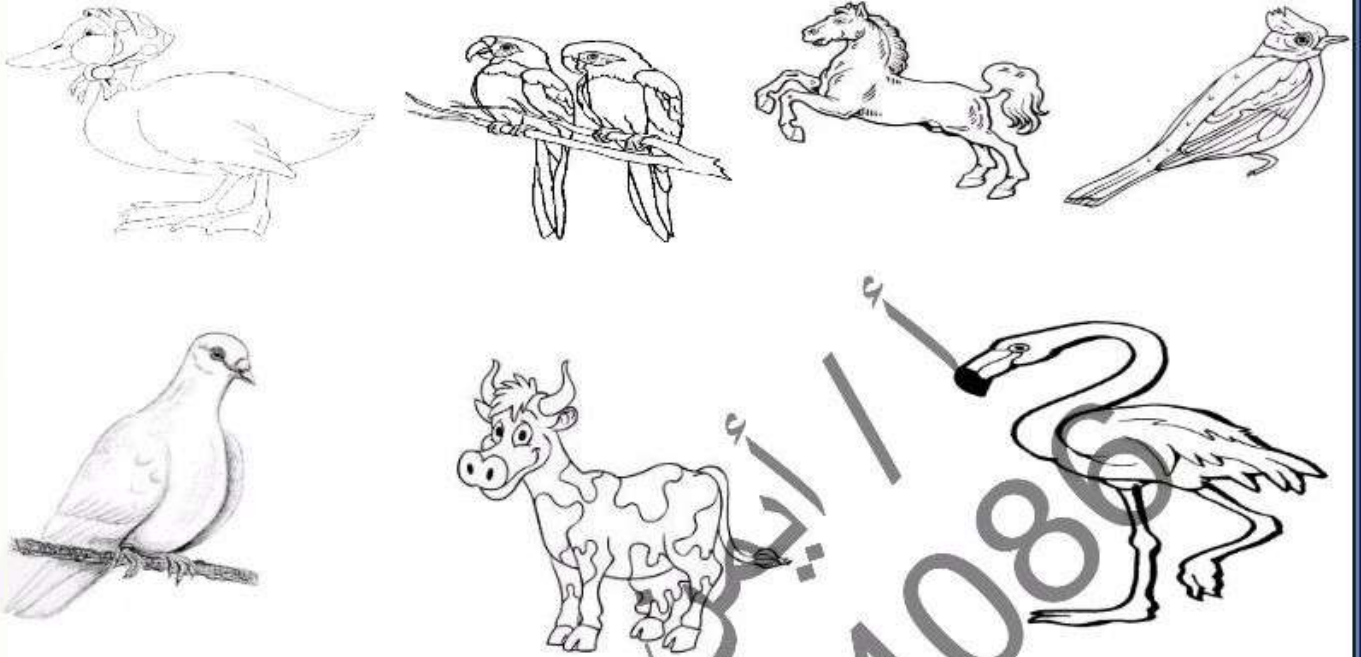
★ Write the number just after:

| | | |
|---------|---------|---------|
| 3 | 6 | 1 |
| 2 | 4 | 0 |
| 5 | 2 | 8 |
| 9 | 1 | 6 |
| 8 | 7 | 4 |
| 1 | 5 | 2 |


01022744086

سعر المذكرة بدون اسم أو علامة مائية 60 جنيهاً للسادة الزملاء

★ **Colour the birds:**



★ **Colour the different item:**




01022744086

سعر المذكرة بدون اسم أو علامة مائة 60 جنيهاً للسادة الزملاء

★ Circle the cars set and the bikes set:



★ Circle the planes set and the boats set:



01022744086

37

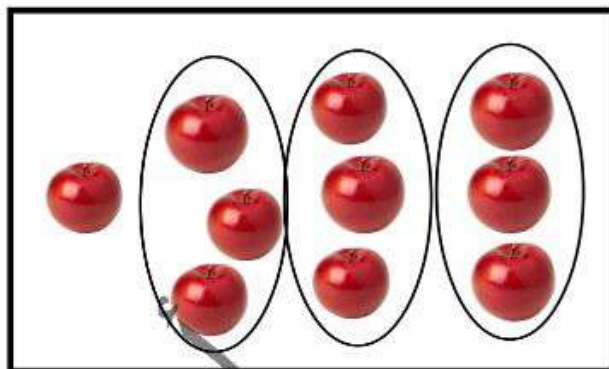
أ / أيمن جابر كامل

سعر المذكرة بدون اسم أو علامة مائبة 60 جنيهاً للسادة الزملاء

★ Look, read, think and answer as in the example:

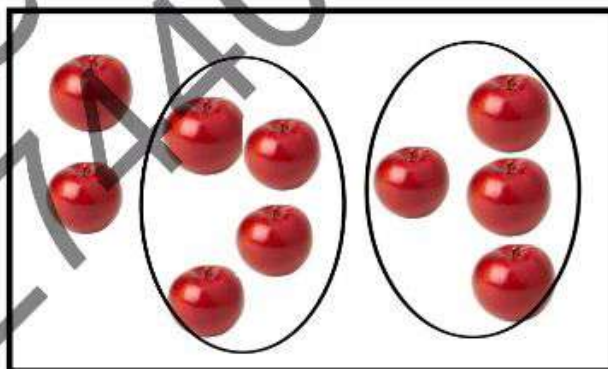
Every set has 3 apples.

There are 3 sets.



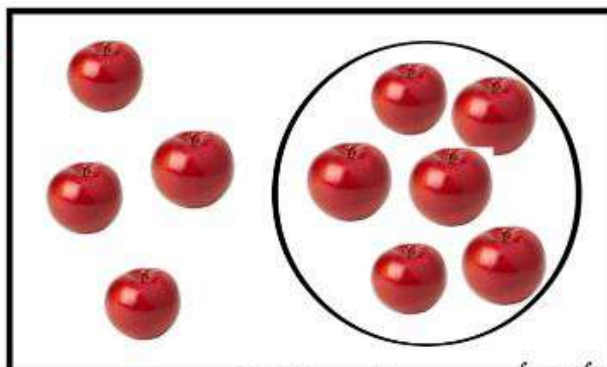
Every set has ... apples.

There are ... sets.



Every set has ... apples.

There are ... sets.





01022744086

سعر المذكرة بدون اسم أو علامة مائة 60 جنيهاً للسادة الزملاء

★ Look, read, think and answer using $<$, $=$ or $>$ as in the example:



The set of  $>$ is than the set of  .

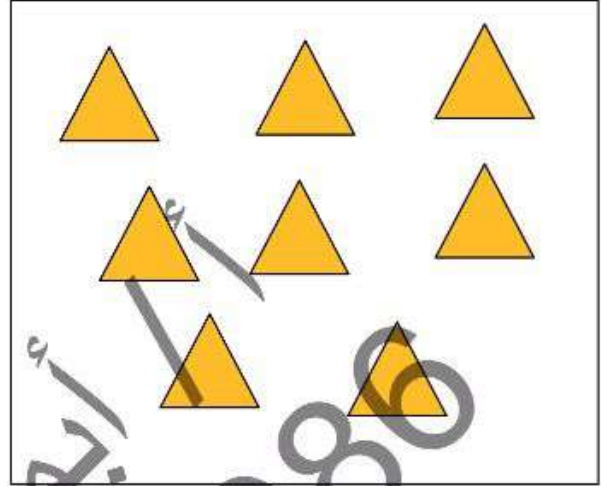



The set of  is than the set of  .



01022744086

سعر المذكرة بدون اسم أو علامة مائبة 60 جنيهاً للسادة الزملاء

★ Look, and draw to make equal sets:



★ Put (✓) under the smallest set:




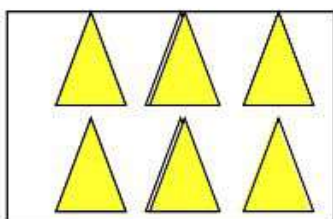


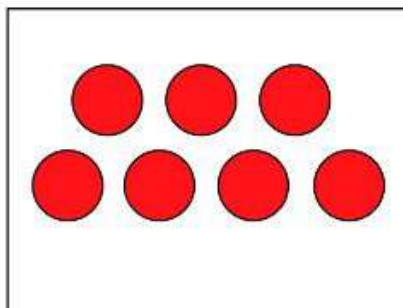
01022744086

40


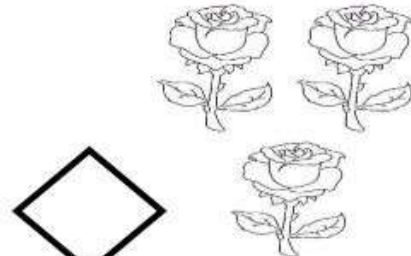

أ / أيمن جابر كامل






سعر المذكرة بدون اسم أو علامة مائبة 60 جنيهاً للسادة الزملاء

★ Join / match the equal sets:



★ Count and complete the table:




| | | | | |
|---|---|---|--|---|
|  |  |  |  |  |
| | | | | |

سعر المذكرة بدون اسم أو علامة مائبة 60 جنيهاً للسادة الزملاء

★ Choose the correct answer:



Number of cats is (greater - less) than the number of mice.



Number of  is (greater - less) than the number of .

01022744086

42

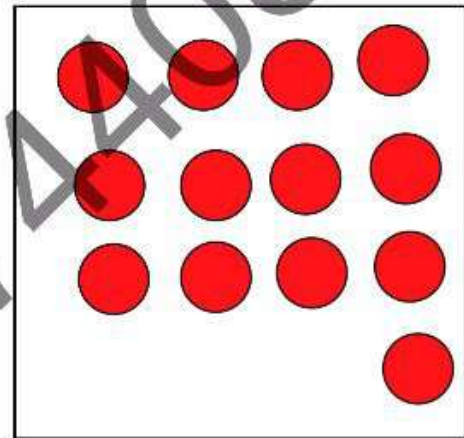
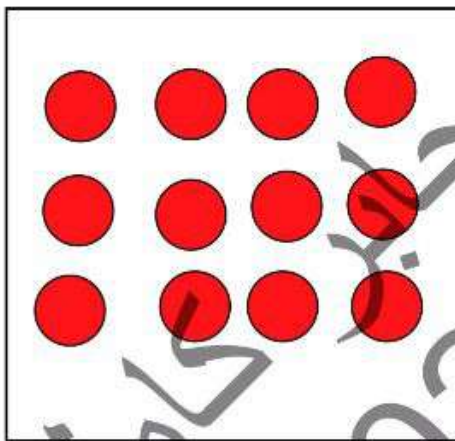
أ / أيمن جابر كامل

سعر المذكرة بدون اسم أو علامة مائة 60 جنيهاً للسادة الزملاء


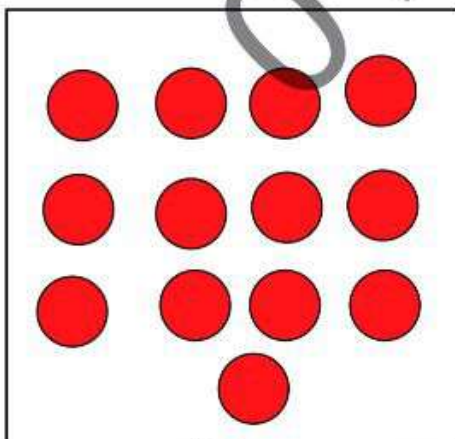
$$13 : 15$$



| | | | | |
|-------|-------|-------|-------|-------|
| 11 | 12 | 13 | 14 | 15 |
| | | | | |
| | | | | |




(12) Less / smaller than < (13)




(13) Greater than > (12)

01022744086

سعر المذكرة بدون اسم أو علامة مائية 60 جنيهاً للسادة الزملاء

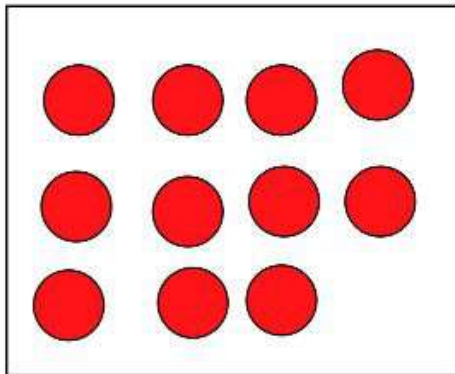


12

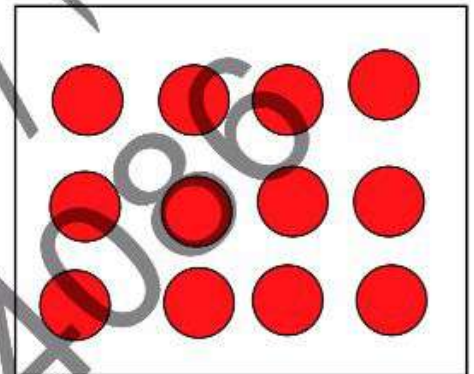


12

Equal to =



11



12

Less / smaller than <

★ Read, think and answer using (>), (<) or (=):

| | | | | | |
|----|--|----|----|--|----|
| 10 | | 9 | 8 | | 11 |
| 10 | | 8 | 10 | | 1 |
| 10 | | 13 | 11 | | 10 |
| 10 | | 10 | 0 | | 5 |

01022744086

سعر المذكرة بدون اسم أو علامة مائة 60 جنيهاً للسادة الزملاء

★ Read, think and complete:



| | | | | | |
|----|---|---|---|---|----|
| 10 | ∨ | | | ≡ | 11 |
| | ∧ | 8 | | ∨ | 1 |
| 4 | ∨ | | | ∧ | 10 |
| 9 | ≡ | | 0 | ∨ | |
| | ∨ | 9 | 8 | ≡ | |
| | ∧ | 8 | 1 | ∨ | |
| 10 | ∨ | | | ∧ | 10 |
| 5 | ≡ | | 3 | ∨ | |

سعر المذكرة بدون اسم أو علامة مائة 60 جنيهاً للسادة الزملاء

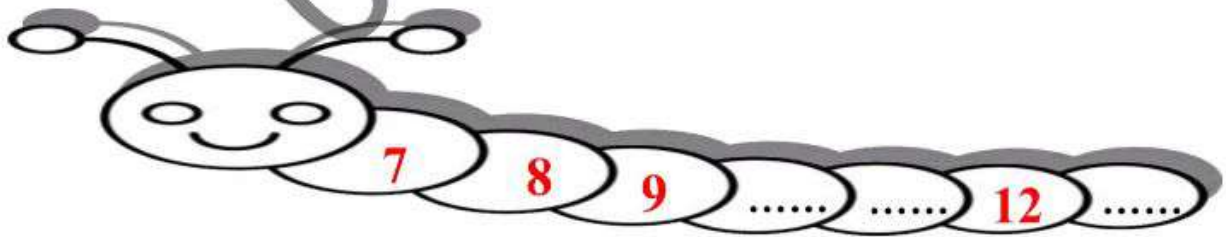

★ Read, think and answer using (>), (<) or (=):

4 0
3 5
9 6
2 2



5 7
4 4
10 8
3 1

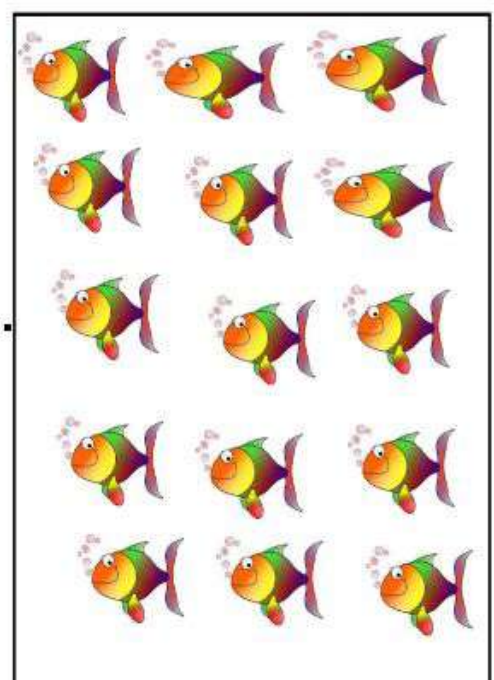

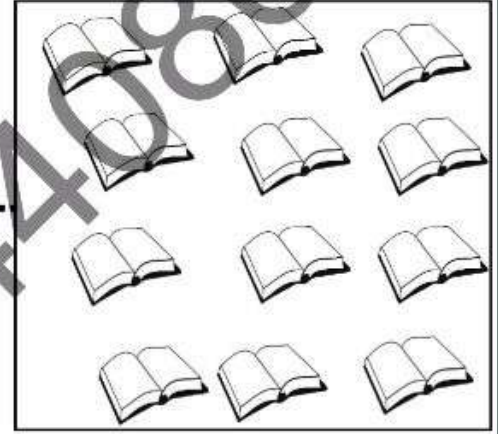
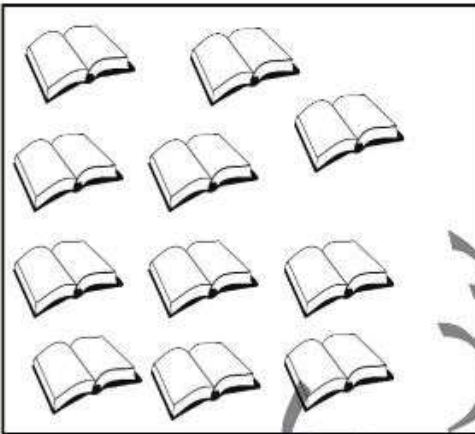
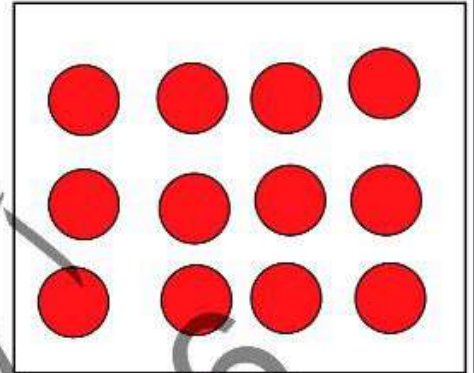
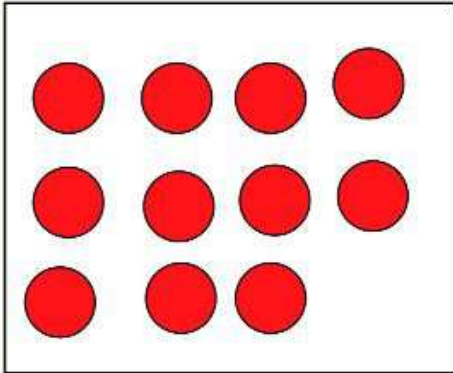
★ Look, complete and colour:



01022744086

سعر المذكرة بدون اسم أو علامة مائة 60 جنيهاً للسادة الزملاء

★ Look, count and answer using (>), (<) or (=):



01022744086

سعر المذكرة بدون اسم أو علامة مائة 60 جنيهاً للسادة الزملاء

★ Read and circle the correct answer:



| | | | | | |
|--------------------------|---|----|----|----|----|
| <input type="checkbox"/> | < | 13 | 10 | 13 | 15 |
| <input type="checkbox"/> | > | 10 | 10 | 9 | 11 |
| <input type="checkbox"/> | > | 9 | 8 | 9 | 10 |
| <input type="checkbox"/> | < | 12 | 11 | 12 | 13 |
| <input type="checkbox"/> | = | 8 | 7 | 8 | 9 |
| <input type="checkbox"/> | > | 14 | 13 | 14 | 15 |
| <input type="checkbox"/> | = | 15 | 14 | 15 | 16 |
| <input type="checkbox"/> | > | 13 | 12 | 13 | 14 |
| <input type="checkbox"/> | < | 15 | 14 | 15 | 16 |
| <input type="checkbox"/> | < | 12 | 11 | 12 | 13 |

01022744086

48

أ / أيمن جابر كامل

سعر المذكرة بدون اسم أو علامة مائة 60 جنيهاً للسادة الزملاء

★ Look, complete and colour:

| | | | | |
|-------|-------|-------|-------|-------|
| 16 | 17 | 18 | 19 | 20 |
| | | | | |
| | | | | |
| | | | | |



★ Look, complete and colour:

| | | | | | | | | | | | |
|-------|-------|-------|-------|-------|-------|-------|-------|-------|-------|----|--|
| 10 | | | | | | | | | | 20 | |
| 0 | | | | | | | | | | 10 | |
| | | | | 15 | | | | | | 20 | |

01022744086

سعر المذكرة بدون اسم أو علامة مائبة 60 جنيهاً للسادة الزملاء


★ Read, think and complete:



| | | | | | |
|----------------------|---|----------------------|----------------------|---|----------------------|
| <input type="text"/> | > | 5 | 2 | = | <input type="text"/> |
| <input type="text"/> | < | 8 | 1 | > | <input type="text"/> |
| 10 | > | <input type="text"/> | <input type="text"/> | < | 5 |
| 0 | = | <input type="text"/> | 8 | > | <input type="text"/> |

★ Read, think and answer using (>), (<) or (=):

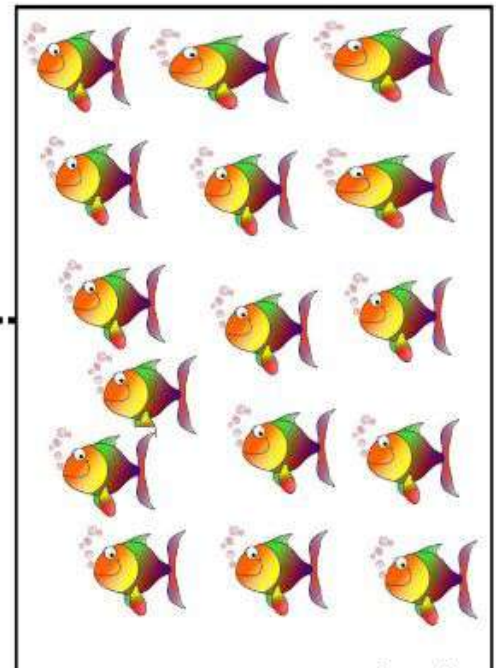


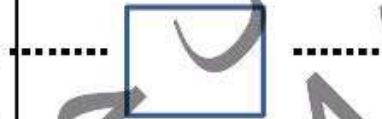
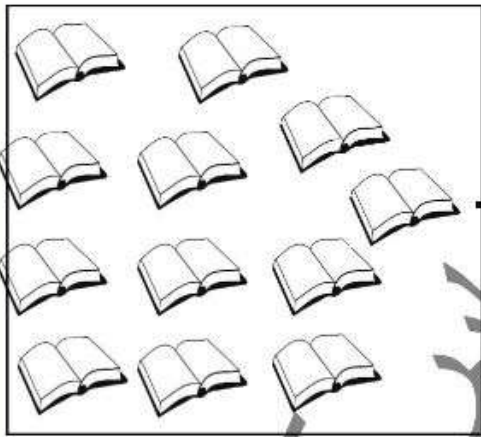


| | | | | | |
|---|----------------------|---|---|----------------------|----|
| 4 | <input type="text"/> | 5 | 3 | <input type="text"/> | 4 |
| 2 | <input type="text"/> | 5 | 2 | <input type="text"/> | 2 |
| 9 | <input type="text"/> | 7 | 9 | <input type="text"/> | 8 |
| 1 | <input type="text"/> | 2 | 3 | <input type="text"/> | 10 |



01022744086

سعر المذكرة بدون اسم أو علامة مائة 60 جنيهاً للسادة الزملاء

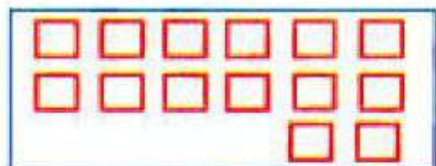
★ Count, think and answer using (>), (<) or (=):



01022744086

سعر المذكرة بدون اسم أو علامة مائة 60 جنيهاً للسادة الزملاء

★ Count and match:




15




12



18



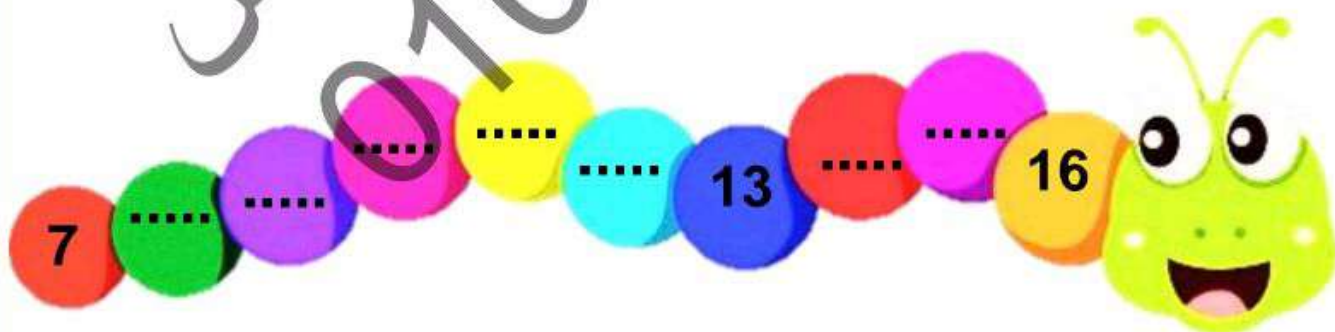
14



16



★ Look, count and complete:



01022744086

52

أ / أيمن جابر كامل

سعر المذكرة بدون اسم أو علامة مائة 60 جنيهاً للسادة الزملاء

★ Complete in the same pattern:

| | | | | | | | | | |
|----|--|--|--|--|--|--|--|--|----|
| 1 | | | | | | | | | 10 |
| 11 | | | | | | | | | 20 |

| | | | | | | | | | |
|----|--|--|--|---|--|--|--|--|----|
| 1 | | | | 5 | | | | | 10 |
| 11 | | | | | | | | | 20 |

| | | | | | | | | | |
|----|--|--|--|--|--|---|--|--|----|
| 1 | | | | | | 7 | | | 10 |
| 11 | | | | | | | | | 20 |

| | | | | | | | | | |
|----|--|--|--|---|----|--|--|--|----|
| 1 | | | | 5 | | | | | 10 |
| 11 | | | | | 16 | | | | 20 |

| | | | | | | | | | |
|----|--|--|----|--|---|--|--|--|----|
| 1 | | | | | 6 | | | | 10 |
| 11 | | | 14 | | | | | | 20 |

| | | | | | | | | | |
|----|--|---|--|----|--|--|--|--|----|
| 1 | | 3 | | | | | | | 10 |
| 11 | | | | 15 | | | | | 20 |

01022744086

سعر المذكرة بدون اسم أو علامة مائة 60 جنيهاً للسادة الزملاء

★ Read, think and complete:



| | | | | | |
|---|---|---|----|---|---|
| | > | 4 | 3 | = | |
| | < | 7 | 5 | > | |
| 9 | > | | | < | 4 |
| 1 | = | | 7 | > | |
| | > | 2 | 4 | = | |
| | < | 6 | 3 | > | |
| 8 | > | | | < | 7 |
| 6 | = | | 10 | > | |

01022744086

54


أ / أيمن جابر كامل

سعر المذكرة بدون اسم أو علامة مائية 60 جنيهاً للسادة الزملاء


★ **Count and circle the correct number:**




7 8 9



7 8 9



10 11 12




7 9 8



6 7 8




6 7 8



11 12 13




10 11 12




6 7 8



4 5 6



6 7 8

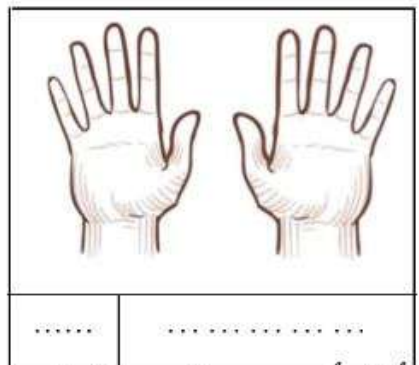






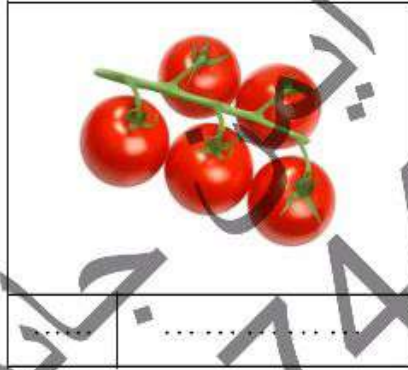
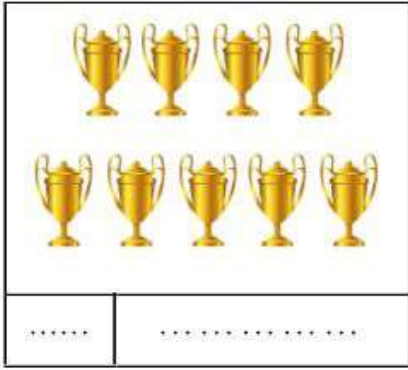




2 3 4

01022744086

سعر المذكرة بدون اسم أو علامة مائبة 60 جنيهاً للسادة الزملاء

★ **Look and write in (digits and letters) the number:**



01022744086

سعر المذكرة بدون اسم أو علامة مائة 60 جنيهاً للسادة الزملاء

★ Look, complete and colour:



★ Look, complete and colour:



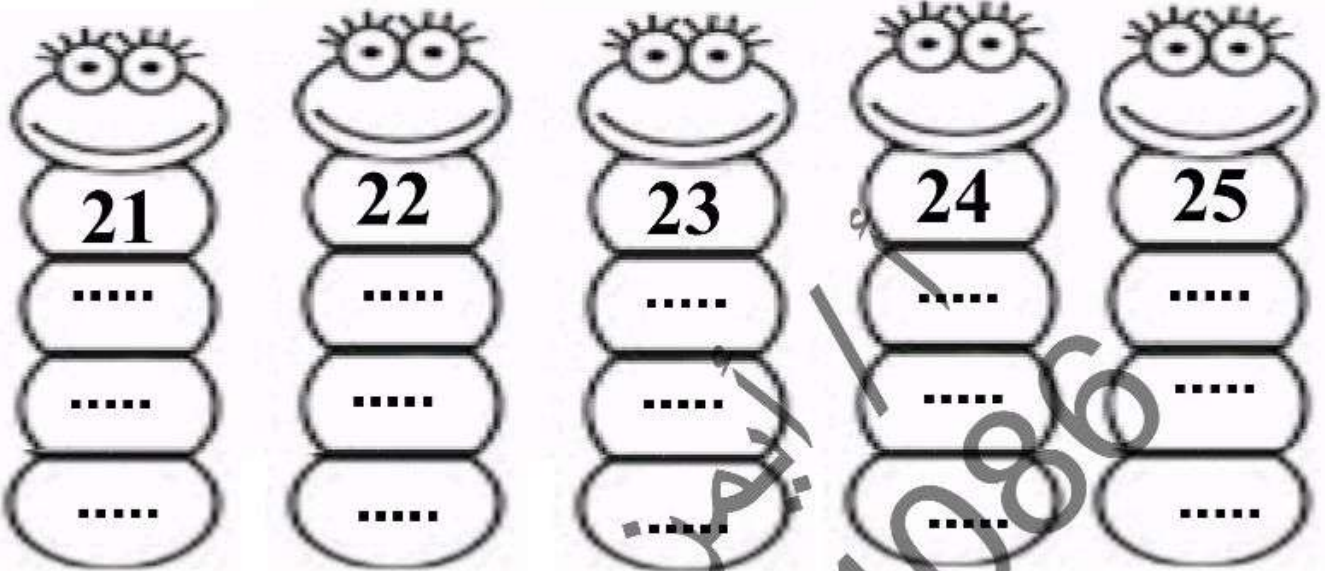
01022744086

57


أ / أيمن جابر كامل

سعر المذكرة بدون اسم أو علامة مائة 60 جنيهاً للسادة الزملاء

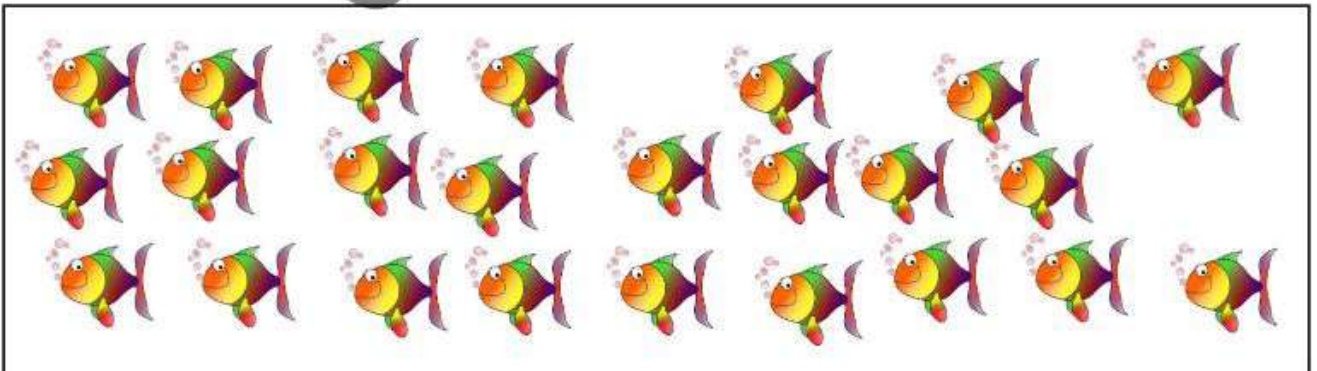
21 : 25



★ Look, count and complete:



....



....

01022744086

سعر المذكرة بدون اسم أو علامة مائبة 60 جنيهاً للسادة الزملاء

★ Read, think and answer using < , = or >

3

5

8

4

5

3

3

9

10

2

8

7

4

7

9

22

22

5

1

4

5

8

3

8

14

2

7

7

4

9

9

21

8

5

3

4

5

9

3

8

19

2

9


7

4

2

9

20



01022744086

59

أ / أيمن جابر كامل

سعر المذكرة بدون اسم أو علامة مائة 60 جنيهاً للسادة الزملاء

Ones & Tens

★ Look, read and complete as in the example:

| | |
|-----------------------------|-----------------------------|
| 14 = Ones & Tens | 18 = Ones & Tens |
| 11 = Ones & Tens | 13 = Ones & Tens |
| 22 = Ones & Tens | 16 = Ones & Tens |
| 10 = Ones & Tens | 25 = Ones & Tens |

21 22 23 24 25 26 27 28 29 30

★ Look, read and write:

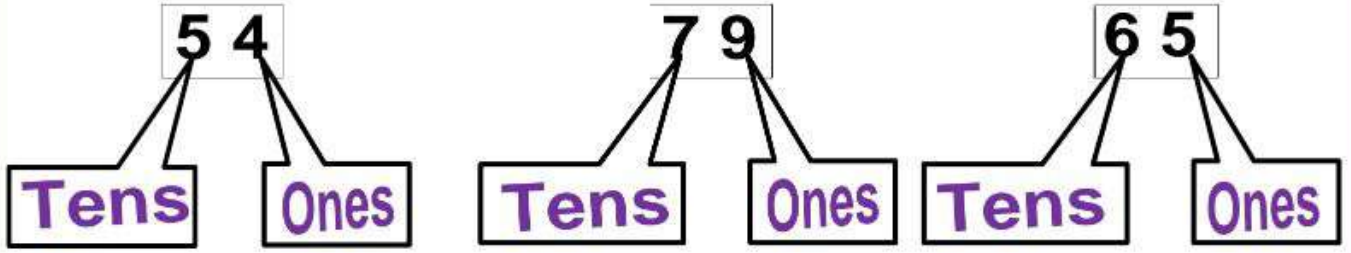
| | | | | | | | | | |
|-------|-------|-------|-------|-------|-------|-------|-------|-------|-------|
| 21 | 22 | 23 | 24 | 25 | 26 | 27 | 28 | 29 | 30 |
| | | | | | | | | | |
| | | | | | | | | | |
| | | | | | | | | | |

01022744086

60

أ / أيمن جابر كامل

سعر المذكرة بدون اسم أو علامة مائة 60 جنيهاً للسادة الزملاء



Tens

10 Tens = 10
20 Tens = 20
30 Tens = 30
40 Tens = 40
50 Tens = 50
60 Tens = 60
70 Tens = 70
80 Tens = 80
90 Tens = 90

Ones

1 Ones = 1
2 Ones = 2
3 Ones = 3
4 Ones = 4
5 Ones = 5
6 Ones = 6
7 Ones = 7
8 Ones = 8
9 Ones = 9

★ Read and complete as in the example:

12 = Ones + Tens

14 = Ones + Tens

13 = Ones + Tens

15 = Ones + Tens

17 = Ones + Tens

16 = Ones + Tens

19 = Ones + Tens

18 = Ones + Tens

01022744086

سعر المذكرة بدون اسم أو علامة مائة 60 جنياً للسادة الزملاء

★ Read and complete as in the example:

| | Ones | Tens |
|----|-------|-------|
| 90 | 0 | 9 |
| 54 | | |
| 91 | | |
| 64 | | |
| 78 | | |
| 45 | | |
| 16 | | |
| 40 | | |
| 52 | | |
| 54 | | |
| 38 | | |
| 72 | | |
| 43 | | |
| 95 | | |
| 21 | | |
| 59 | | |

| | Ones | Tens |
|----|-------|-------|
| 34 | | |
| 22 | | |
| 67 | | |
| 15 | | |
| 13 | | |
| 96 | | |
| 86 | | |
| 84 | | |
| 24 | | |
| 29 | | |
| 36 | | |
| 39 | | |
| 50 | | |
| 47 | | |
| 55 | | |
| 12 | | |

01022744086

سعر المذكرة بدون اسم أو علامة مائية 60 جنيهاً للسادة الزملاء

★ Read and complete as in the example:

$22 = \dots \text{ Ones} + \dots \text{ Tens}$

$44 = \dots \text{ Ones} + \dots \text{ Tens}$

$33 = \dots \text{ Ones} + \dots \text{ Tens}$

$55 = \dots \text{ Ones} + \dots \text{ Tens}$

$11 = \dots \text{ Ones} + \dots \text{ Tens}$

$19 = \dots \text{ Ones} + \dots \text{ Tens}$

$18 = \dots \text{ Ones} + \dots \text{ Tens}$

$58 = \dots \text{ Ones} + \dots \text{ Tens}$

$32 = \dots \text{ Ones} + \dots \text{ Tens}$

$54 = \dots \text{ Ones} + \dots \text{ Tens}$

$63 = \dots \text{ Ones} + \dots \text{ Tens}$

$75 = \dots \text{ Ones} + \dots \text{ Tens}$

$97 = \dots \text{ Ones} + \dots \text{ Tens}$

$86 = \dots \text{ Ones} + \dots \text{ Tens}$

$79 = \dots \text{ Ones} + \dots \text{ Tens}$

$28 = \dots \text{ Ones} + \dots \text{ Tens}$

$82 = \dots \text{ Ones} + \dots \text{ Tens}$

$24 = \dots \text{ Ones} + \dots \text{ Tens}$

$23 = \dots \text{ Ones} + \dots \text{ Tens}$

$65 = \dots \text{ Ones} + \dots \text{ Tens}$

$27 = \dots \text{ Ones} + \dots \text{ Tens}$

$76 = \dots \text{ Ones} + \dots \text{ Tens}$

$10 = \dots \text{ Ones} + \dots \text{ Tens}$

$78 = \dots \text{ Ones} + \dots \text{ Tens}$

01022744086

63

أ / أيمن جابر كامل

سعر المذكرة بدون اسم أو علامة مائة 60 جنيهاً للسادة الزملاء

★ Read and complete as in the example:

$$35 = 5 \text{ Ones} + 3 \text{ Tens}$$

$$\dots = 1 \text{ Ones} + 2 \text{ Tens}$$

$$\dots = 3 \text{ Ones} + 4 \text{ Tens}$$

$$\dots = 5 \text{ Ones} + 4 \text{ Tens}$$

$$\dots = 7 \text{ Ones} + 4 \text{ Tens}$$

$$\dots = 9 \text{ Ones} + 4 \text{ Tens}$$

$$\dots = 1 \text{ Ones} + 2 \text{ Tens}$$

$$\dots = 0 \text{ Ones} + 4 \text{ Tens}$$

$$\dots = 1 \text{ Ones} + 3 \text{ Tens}$$

$$\dots = 9 \text{ Ones} + 5 \text{ Tens}$$

$$\dots = 4 \text{ Ones} + 2 \text{ Tens}$$

$$\dots = 3 \text{ Ones} + 5 \text{ Tens}$$

$$\dots = 2 \text{ Ones} + 4 \text{ Tens}$$

$$\dots = 6 \text{ Ones} + 4 \text{ Tens}$$

$$\dots = 5 \text{ Ones} + 2 \text{ Tens}$$

$$\dots = 7 \text{ Ones} + 4 \text{ Tens}$$



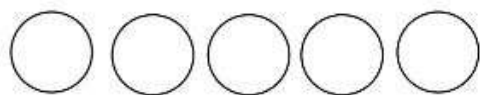
01022744086

64

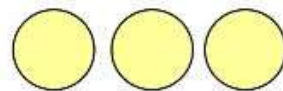
أ / أيمن جابر كامل

سعر المذكرة بدون اسم أو علامة مائية 60 جنيهاً للسادة الزملاء

Addition and Subtraction

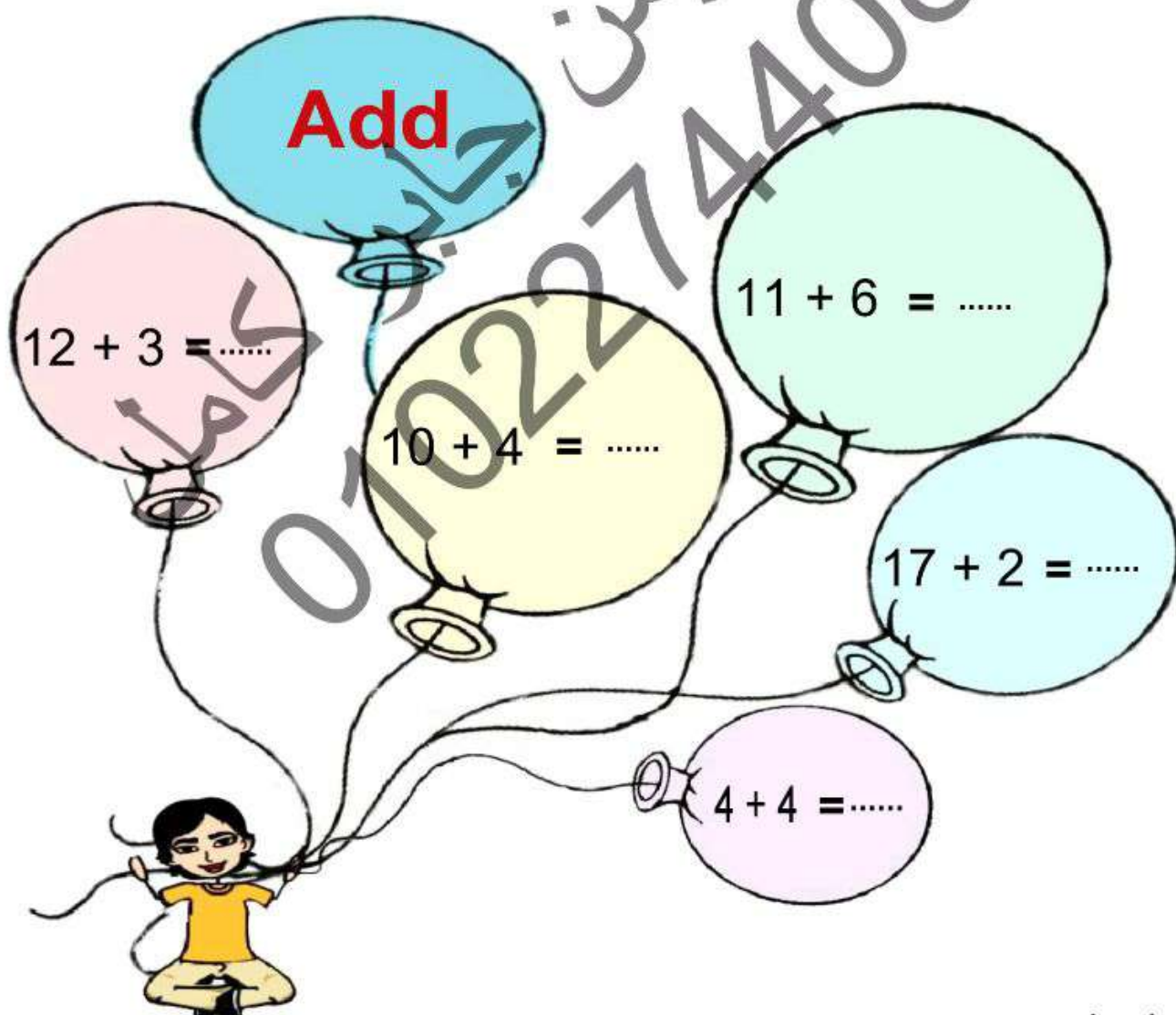


White circles = 5



Yellow circles = 3

All circles = $5 + 3 = 8$ circles



01022744086

65

أ / أيمن جابر كامل

سعر المذكرة بدون اسم أو علامة مائة 60 جنيهاً للسادة الزملاء

★ add as in the example:

$1 + 0 = 1$

$1 + 1 = \dots\dots$

$1 + 2 = \dots\dots$

$1 + 3 = \dots\dots$

$1 + 4 = \dots\dots$

$1 + 5 = \dots\dots$

$1 + 6 = \dots\dots$

$1 + 7 = \dots\dots$

$1 + 8 = \dots\dots$

$1 + 9 = \dots\dots$

 $2 + 0 = \dots\dots$

$2 + 1 = \dots\dots$

$2 + 2 = \dots\dots$

$2 + 3 = \dots\dots$

$2 + 4 = \dots\dots$

$2 + 5 = \dots\dots$

$2 + 6 = \dots\dots$

$2 + 7 = \dots\dots$

$2 + 8 = \dots\dots$

$2 + 9 = \dots\dots$

 $3 + 0 = \dots\dots$

$3 + 1 = \dots\dots$

$3 + 2 = \dots\dots$

$3 + 3 = \dots\dots$

$3 + 4 = \dots\dots$

$3 + 5 = \dots\dots$

$3 + 6 = \dots\dots$

$3 + 7 = \dots\dots$

01022744086

سعر المذكرة بدون اسم أو علامة مائية 60 جنيهاً للسادة الزملاء

★ add as in the example:

$4 + 0 = 4$

$4 + 1 = \dots\dots$

$4 + 2 = \dots\dots$

$4 + 3 = \dots\dots$

$4 + 4 = \dots\dots$

$4 + 5 = \dots\dots$

$4 + 6 = \dots\dots$

$4 + 7 = \dots\dots$

$4 + 8 = \dots\dots$

$4 + 9 = \dots\dots$

 $5 + 0 = \dots\dots$

$5 + 1 = \dots\dots$

$5 + 2 = \dots\dots$

$5 + 3 = \dots\dots$

$5 + 4 = \dots\dots$

$5 + 5 = \dots\dots$

$5 + 6 = \dots\dots$

$5 + 7 = \dots\dots$

$5 + 8 = \dots\dots$

$5 + 9 = \dots\dots$

 $6 + 0 = \dots\dots$

$6 + 1 = \dots\dots$

$6 + 2 = \dots\dots$

$6 + 3 = \dots\dots$

$6 + 4 = \dots\dots$

$6 + 5 = \dots\dots$

$6 + 6 = \dots\dots$

$6 + 7 = \dots\dots$

01022744086

سعر المذكرة بدون اسم أو علامة مائة 60 جنيهاً للسادة الزملاء

★ add as in the example:

$7 + 0 = 7$

$7 + 1 = \dots\dots$

$7 + 2 = \dots\dots$

$7 + 3 = \dots\dots$

$7 + 4 = \dots\dots$

$7 + 5 = \dots\dots$

$7 + 6 = \dots\dots$

$7 + 7 = \dots\dots$

$7 + 8 = \dots\dots$

$7 + 9 = \dots\dots$

 $8 + 0 = \dots\dots$

$8 + 1 = \dots\dots$

$8 + 2 = \dots\dots$

$8 + 3 = \dots\dots$

$8 + 4 = \dots\dots$

$8 + 5 = \dots\dots$

$8 + 6 = \dots\dots$

$8 + 7 = \dots\dots$

$8 + 8 = \dots\dots$

$8 + 9 = \dots\dots$

 $9 + 0 = \dots\dots$

$9 + 1 = \dots\dots$

$9 + 2 = \dots\dots$

$9 + 3 = \dots\dots$

$9 + 4 = \dots\dots$

$9 + 5 = \dots\dots$

$9 + 6 = \dots\dots$

$9 + 7 = \dots\dots$

01022744086

سعر المذكرة بدون اسم أو علامة مائبة 60 جنيهاً للسادة الزملاء

★ add as in the example:

$10 + 0 = 10$

$10 + 1 = \dots\dots$

$10 + 2 = \dots\dots$

$10 + 3 = \dots\dots$

$10 + 4 = \dots\dots$

$10 + 5 = \dots\dots$

$10 + 6 = \dots\dots$

$10 + 7 = \dots\dots$

$10 + 8 = \dots\dots$

$10 + 9 = \dots\dots$

★ Read, think and complete:


1- Sohaila bought a pen (3 pounds) and a book (2 pounds).

Sohaila paid = + = pounds.

2- Ahmed bought a ball (5 pounds) and a toy (4 pounds).

Ahmed paid = + = pounds.

سعر المذكرة بدون اسم أو علامة مائة 60 جنيهاً للسادة الزملاء



| | | | | |
|-------|-------|-------|-------|-------|
| 26 | 27 | 28 | 29 | 30 |
| | | | | |
| | | | | |
| | | | | |

★ Read, think and complete:

Ahmed bought a plane (5 pounds) and a car (4 pounds).

Ahmed paid = + = pounds.

01022744086

سعر المذكرة بدون اسم أو علامة مائة 60 جنيهاً للسادة الزملاء

★ **Read, think and complete using (>), (<) or (=):**

$6 + 1 \dots\dots\dots 2 + 6$

$3 + 4 \dots\dots\dots 2 + 5$

$5 + 3 \dots\dots\dots 2 + 7$

$9 + 0 \dots\dots\dots 5 + 4$

$3 + 2 \dots\dots\dots 1 + 4$

$1 + 8 \dots\dots\dots 2 + 3$

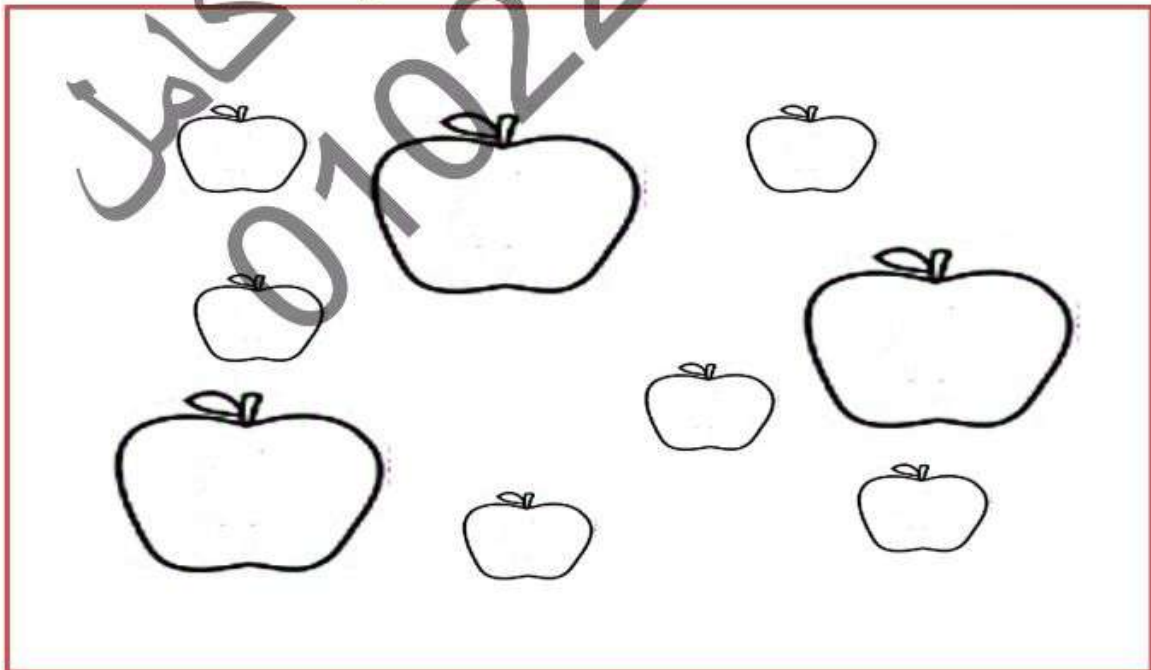
$5 + 1 \dots\dots\dots 2 + 4$

$6 + 2 \dots\dots\dots 1 + 4$

$2 + 0 \dots\dots\dots 3 + 1$

$2 + 2 \dots\dots\dots 0 + 4$

★ **Colour the big apples using red and the small apples using green:**



01022744086

سعر المذكرة بدون اسم أو علامة مائة 60 جنيهاً للسادة الزملاء

★ **Read, think and circle the correct answer:**

$1 + 3 = \dots\dots\dots (3, 4, 5)$

$2 + 3 = \dots\dots\dots (3, 4, 5)$

$4 + 3 = \dots\dots\dots (7, 6, 5)$

$5 + 4 = \dots\dots\dots (7, 8, 9)$

$2 + 5 = \dots\dots\dots (5, 6, 7)$

$2 + 4 = \dots\dots\dots (2, 4, 6)$

$1 + 4 = \dots\dots\dots (3, 4, 5)$

$6 + 3 = \dots\dots\dots (3, 6, 9)$

$8 + 1 = \dots\dots\dots (1, 9, 8)$

$7 + 2 = \dots\dots\dots (1, 4, 9)$

$4 + 0 = \dots\dots\dots (0, 4, 6)$

$9 + 0 = \dots\dots\dots (9, 0, 1)$

$2 + 6 = \dots\dots\dots (6, 7, 8)$

$5 + 1 = \dots\dots\dots (3, 6, 9)$

$1 + 5 = \dots\dots\dots (5, 6, 7)$

$2 + 2 = \dots\dots\dots (2, 4, 6)$

$0 + 4 = \dots\dots\dots (3, 4, 5)$

$3 + 3 = \dots\dots\dots (3, 6, 9)$

$7 + 1 = \dots\dots\dots (1, 9, 8)$

$3 + 2 = \dots\dots\dots (1, 5, 9)$

$4 + 2 = \dots\dots\dots (0, 4, 6)$

$0 + 0 = \dots\dots\dots (9, 0, 1)$

$1 + 6 = \dots\dots\dots (6, 7, 8)$

$5 + 4 = \dots\dots\dots (3, 6, 9)$

01022744086

سعر المذكرة بدون اسم أو علامة مائبة 60 جنيهاً للسادة الزملاء

★ Look and write:

| 31 | 32 | 33 | 34 | 35 |
|-------|-------|-------|-------|-------|
| | | | | |
| | | | | |
| | | | | |

★ Read, think and complete:



| | | | | | |
|----------------------|---|----------------------|----------------------|---|----------------------|
| <input type="text"/> | > | 24 | 34 | = | <input type="text"/> |
| <input type="text"/> | < | 31 | 33 | > | <input type="text"/> |
| 30 | > | <input type="text"/> | <input type="text"/> | < | 26 |
| 25 | = | <input type="text"/> | 12 | > | <input type="text"/> |

01022744086

سعر المذكرة بدون اسم أو علامة مائة 60 جنيهاً للسادة الزملاء

★ Write the number just before:

| | | |
|----------|----------|----------|
| ← | ← | ← |
| 25 | 12 | 10 |
| 34 | 18 | 20 |
| 27 | 23 | 21 |
| 35 | 33 | 32 |
| 28 | 24 | 22 |
| 30 | 29 | 15 |

★ Write the number just after:

| | | |
|----------|----------|----------|
| → | → | → |
| 24 | 11 | 12 |
| 33 | 17 | 21 |
| 26 | 22 | 24 |
| 34 | 32 | 35 |
| 27 | 23 | 29 |
| 31 | 28 | 14 |

01022744086

سعر المذكرة بدون اسم أو علامة مائة 60 جنياً للسادة الزملاء

★ Complete in the same pattern:

| | | | | | | | | | |
|----|--|--|--|--|--|--|--|--|----|
| 10 | | | | | | | | | 19 |
| 20 | | | | | | | | | 29 |

| | | | | | | | | | |
|----|--|--|----|--|--|--|--|----|--|
| 10 | | | 13 | | | | | | |
| | | | | | | | | 28 | |

| | | | | | | | | | |
|---|----|--|--|--|--|---|--|--|----|
| 1 | | | | | | 7 | | | 10 |
| | 12 | | | | | | | | 20 |

| | | | | | | | | | |
|----|--|--|--|----|--|--|--|--|----|
| 1 | | | | 5 | | | | | |
| 11 | | | | 15 | | | | | 20 |

| | | | | | | | | | |
|--|--|--|----|--|---|--|--|--|----|
| | | | | | 6 | | | | 10 |
| | | | 14 | | | | | | 20 |

| | | | | | | | | | |
|----|--|----|--|----|--|--|--|--|----|
| 16 | | 18 | | | | | | | 25 |
| 26 | | | | 30 | | | | | 35 |


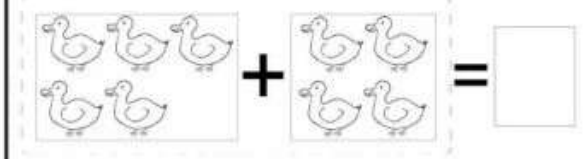
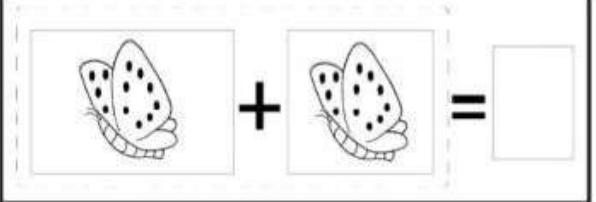
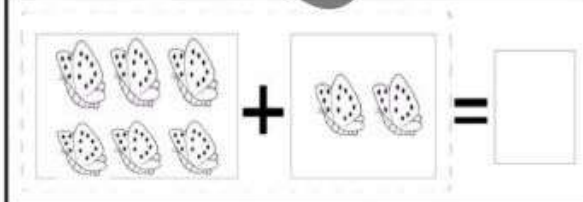

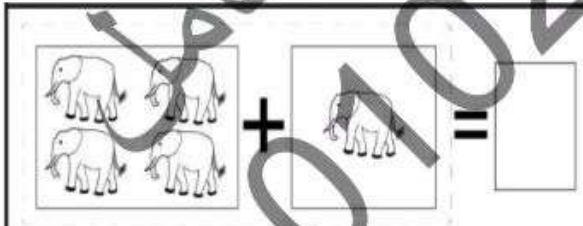
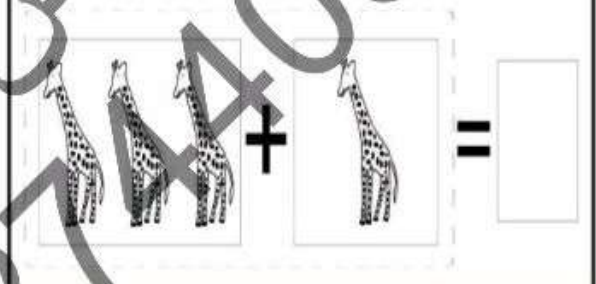
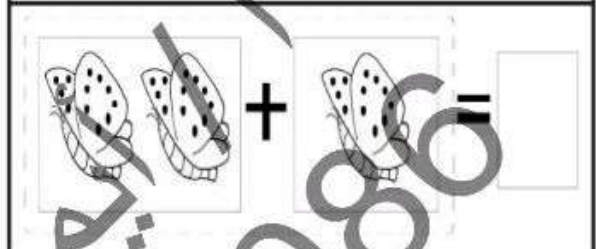
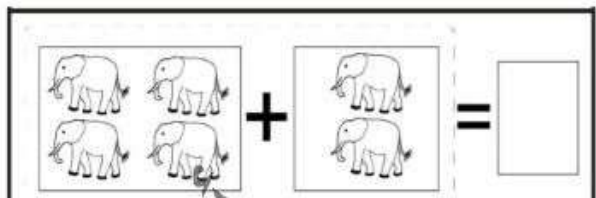
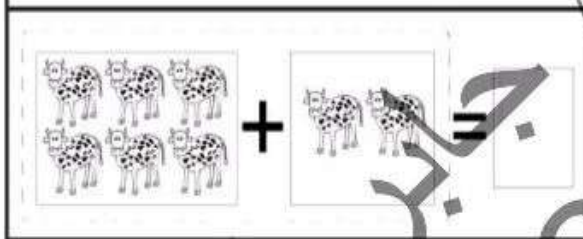
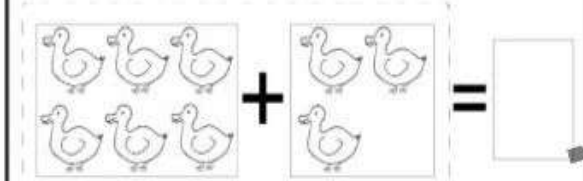

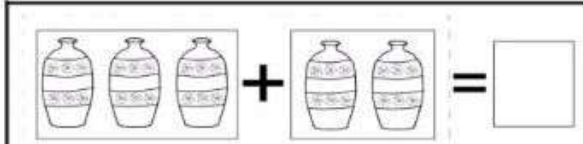
01022744086

75

أ / أيمن جابر كامل

سعر المذكرة بدون اسم أو علامة مائية 60 جنيهاً للسادة الزملاء

★ **Look, think, complete and colour:**



01022744086

سعر المذكرة بدون اسم أو علامة مائة 60 جنيهاً للسادة الزملاء

★ **Read, think and complete:**

A group of friends consists of 5 children. 3 other children joined them. What is the number of children in the new group?

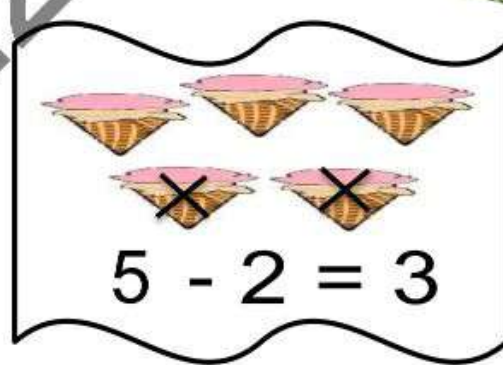
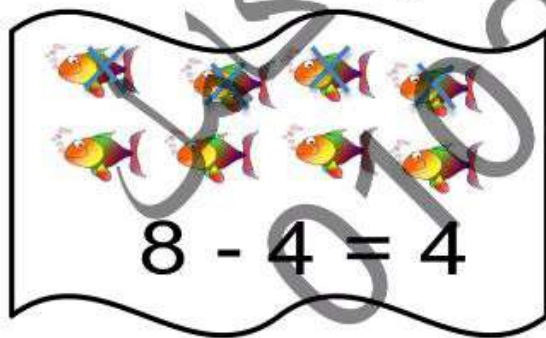
The number of children =+.....=.....

Ali has 3 candies and he bought another 4. How many candies Ali have?

The number of candies =+.....=.....

★ **Look, think, and complete as in the examples:**

Subtract



4 - 2 = (2, 4, 6)

9 - 0 = (9, 0, 1)

8 - 6 = (6, 2, 8)

7 - 4 = (3, 6, 9)

سعر المذكرة بدون اسم أو علامة مائة 60 جنيهاً للسادة زملاء

★ **Read, think and circle the correct answer:**

$18 - 3 = \dots\dots\dots (3, 4, 5)$

$8 - 3 = \dots\dots\dots (3, 4, 5)$

$10 - 3 = \dots\dots\dots (7, 6, 5)$

$13 - 4 = \dots\dots\dots (7, 8, 9)$

$2 + 5 = \dots\dots\dots (5, 6, 7)$

$10 - 4 = \dots\dots\dots (2, 4, 6)$

$7 - 4 = \dots\dots\dots (3, 4, 5)$

$9 - 3 = \dots\dots\dots (3, 6, 9)$

$10 - 1 = \dots\dots\dots (1, 9, 8)$

$6 - 2 = \dots\dots\dots (1, 4, 9)$

$6 - 0 = \dots\dots\dots (0, 4, 6)$

$0 - 0 = \dots\dots\dots (9, 0, 1)$

$12 - 6 = \dots\dots\dots (6, 7, 8)$

$7 - 1 = \dots\dots\dots (3, 6, 9)$

$11 - 5 = \dots\dots\dots (5, 6, 7)$

$4 - 2 = \dots\dots\dots (2, 4, 6)$

$8 - 4 = \dots\dots\dots (3, 4, 5)$

$12 - 3 = \dots\dots\dots (3, 6, 9)$

$10 - 1 = \dots\dots\dots (1, 9, 8)$

$11 - 2 = \dots\dots\dots (1, 5, 9)$

$2 - 2 = \dots\dots\dots (0, 4, 6)$

$1 - 0 = \dots\dots\dots (9, 0, 1)$

$12 - 6 = \dots\dots\dots (6, 7, 8)$

$7 - 4 = \dots\dots\dots (3, 6, 9)$

01022744086

سعر المذكرة بدون اسم أو علامة مائية 60 جنيهاً للسادة الزملاء

★ Subtract as in the example:

$1 - 0 = 1$

$1 - 1 = \dots\dots$

$1 - 2 = \dots\dots$

$1 - 3 = \dots\dots$

$1 - 4 = \dots\dots$

$1 - 5 = \dots\dots$

$1 - 6 = \dots\dots$

$1 - 7 = \dots\dots$

$1 - 8 = \dots\dots$

$1 - 9 = \dots\dots$

 $2 - 0 = \dots\dots$

$2 - 1 = \dots\dots$

$2 - 2 = \dots\dots$

$2 - 3 = \dots\dots$

$2 - 4 = \dots\dots$

$2 - 5 = \dots\dots$

$2 - 6 = \dots\dots$

$2 - 7 = \dots\dots$

$2 - 8 = \dots\dots$

$2 - 9 = \dots\dots$

 $3 - 0 = \dots\dots$

$3 - 1 = \dots\dots$

$3 - 2 = \dots\dots$

$3 - 3 = \dots\dots$

$3 - 4 = \dots\dots$

$3 - 5 = \dots\dots$

$3 - 6 = \dots\dots$

$3 - 7 = \dots\dots$

01022744086

سعر المذكرة بدون اسم أو علامة مائة 60 جنيهاً للسادة الزملاء

★ Add as in the example:

$11 + 0 = 11$

$11 + 1 = \dots\dots$

$11 + 2 = \dots\dots$

$11 + 3 = \dots\dots$

$11 + 4 = \dots\dots$

$11 + 5 = \dots\dots$

$11 + 6 = \dots\dots$

$11 + 7 = \dots\dots$

$11 + 8 = \dots\dots$

$11 + 9 = \dots\dots$

 $12 + 0 = \dots\dots$

$12 + 1 = \dots\dots$

$12 + 2 = \dots\dots$

$12 + 3 = \dots\dots$

$12 + 4 = \dots\dots$

$12 + 5 = \dots\dots$

$12 + 6 = \dots\dots$

$12 + 7 = \dots\dots$

$12 + 8 = \dots\dots$

$12 + 9 = \dots\dots$

 $13 + 0 = \dots\dots$

$13 + 1 = \dots\dots$

$13 + 2 = \dots\dots$

$13 + 3 = \dots\dots$

$13 + 4 = \dots\dots$

$13 + 5 = \dots\dots$

$13 + 6 = \dots\dots$

$13 + 7 = \dots\dots$

01022744086

سعر المذكرة بدون اسم أو علامة مائة 60 جنيهاً للسادة الزملاء

★ Subtract as in the example:

$11 - 0 = 11$

$11 - 1 = \dots\dots$

$11 - 2 = \dots\dots$

$11 - 3 = \dots\dots$

$11 - 4 = \dots\dots$

$11 - 5 = \dots\dots$

$11 - 6 = \dots\dots$

$11 - 7 = \dots\dots$

$11 - 8 = \dots\dots$

$11 - 9 = \dots\dots$

 $12 - 0 = \dots\dots$

$12 - 1 = \dots\dots$

$12 - 2 = \dots\dots$

$12 - 3 = \dots\dots$

$12 - 4 = \dots\dots$

$12 - 5 = \dots\dots$

$12 - 6 = \dots\dots$

$12 - 7 = \dots\dots$

$12 - 8 = \dots\dots$

$12 - 9 = \dots\dots$

 $13 - 0 = \dots\dots$

$13 - 1 = \dots\dots$

$13 - 2 = \dots\dots$

$13 - 3 = \dots\dots$

$13 - 4 = \dots\dots$

$13 - 5 = \dots\dots$


$13 - 6 = \dots\dots$

$13 - 7 = \dots\dots$


01022744086

سعر المذكرة بدون اسم أو علامة مائة 60 جنيهاً للسادة الزملاء


★ Look, read, count, think, and add as in the examples:



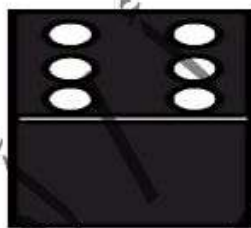
$$\begin{array}{r} \boxed{5} \\ + \boxed{2} \\ \hline \boxed{7} \end{array}$$



$$\begin{array}{r} \boxed{} \\ + \boxed{} \\ \hline \boxed{} \end{array}$$



$$\begin{array}{r} \boxed{} \\ + \boxed{} \\ \hline \boxed{} \end{array}$$



$$\begin{array}{r} \boxed{} \\ + \boxed{} \\ \hline \boxed{} \end{array}$$

★ Read, think and complete using (>), (<) or (=):

$4 \boxed{} 0$

$3 \boxed{} 5$

$9 \boxed{} 6$

$2 \boxed{} 2$

$5 \boxed{} 0$

$4 \boxed{} 5$

$8 \boxed{} 6$

$3 \boxed{} 2$

$5 \boxed{} 7$

$4 \boxed{} 4$

$10 \boxed{} 8$

$3 \boxed{} 1$

$6 \boxed{} 0$

$7 \boxed{} 5$

$4 \boxed{} 6$

$0 \boxed{} 2$



سعر المذكرة بدون اسم أو علامة مائة 60 جنيهاً للسادة الزملاء

★ **Read, think and complete using (>), (<) or (=):**

$2 + 1 \dots\dots\dots 2 + 6$

$9 + 4 \dots\dots\dots 2 + 5$

$2 + 3 \dots\dots\dots 2 + 7$

$9 + 0 \dots\dots\dots 5 + 4$

$2 + 2 \dots\dots\dots 1 + 4$

$9 + 8 \dots\dots\dots 2 + 3$

$3 + 1 \dots\dots\dots 2 + 4$

$9 + 2 \dots\dots\dots 1 + 4$

$2 + 0 \dots\dots\dots 3 + 1$

$9 + 2 \dots\dots\dots 0 + 4$

$5 + 1 \dots\dots\dots 2 + 6$

$8 + 4 \dots\dots\dots 2 + 5$

$5 + 3 \dots\dots\dots 2 + 7$

$0 + 0 \dots\dots\dots 5 + 4$

$5 + 2 \dots\dots\dots 1 + 4$

$8 + 8 \dots\dots\dots 2 + 3$

$8 + 1 \dots\dots\dots 2 + 4$

$8 + 2 \dots\dots\dots 1 + 4$

$8 + 0 \dots\dots\dots 3 + 1$


$4 + 2 \dots\dots\dots 0 + 4$

01022744086

سعر المذكرة بدون اسم أو علامة مائة 60 جنيهاً للسادة الزملاء

★ Look, think, and answer:

Ali caught 4  and Rami caught 2 

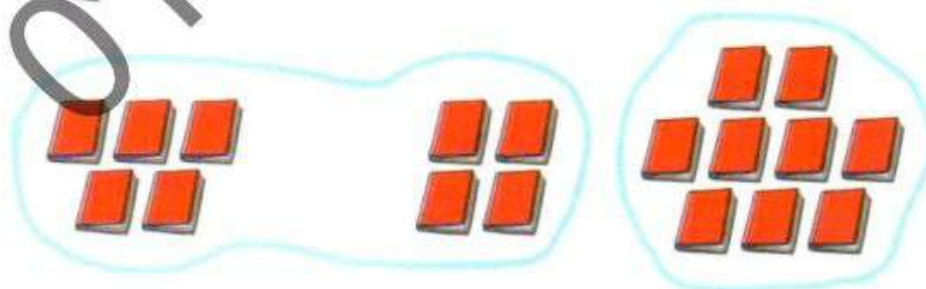
Find the number of  with both.



The number of fish = + = 

Wael has 5  in Arabic and 4  in English

How many  does Wael have ?



What Wael has = + = 

01022744086

سعر المذكرة بدون اسم أو علامة مائة 60 جنيهاً للسادة الزملاء

31 : 40

31 32 33 34 35 36 37 38 39 40

★ Complete in the same pattern:

| | | | | |
|----|----|--|----|----|
| 16 | 17 | | | 20 |
| | 22 | | | 25 |
| | | | 29 | |
| 31 | | | | |
| 36 | | | | 40 |

01022744086

85

أ / أيمن جابر كامل

سعر المذكرة بدون اسم أو علامة مائة 60 جنيهاً للسادة الزملاء

★ Complete in the same pattern:

| | | | | |
|----|----|--|----|----|
| 11 | 12 | | | |
| | 17 | | | 20 |
| | | | 24 | |
| 26 | | | | |
| 31 | | | | |
| 36 | | | | 40 |

01022744086

86

أ / أيمن جابر كامل

سعر المذكرة بدون اسم أو علامة مائة 60 جنيهاً للسادة الزملاء

Hour = 60 minutes

The clock has 2 hands.

Long hand is the minute hand.

Short hand is the hour hand.



★ Look, read, think, and answer as in the examples:



2 o'clock



o'clock

01022744086

87

أ / أيمن جابر كامل

سعر المذكرة بدون اسم أو علامة مائة 60 جنيهاً للسادة الزملاء



9 o'clock



10 o'clock



10 o'clock



10 o'clock




01022744086

88

أ / أيمن جابر كامل

سعر المذكرة بدون اسم أو علامة مائة 60 جنيهاً للسادة الزملاء

★ **Look, count and complete:**



01022744086

89

أ / أيمن جابر كامل

سعر المذكرة بدون اسم أو علامة مائة 60 جنيهاً للسادة الزملاء

★ **Look, count and match:**



★ **Look, count and circle:**



سعر المذكرة بدون اسم أو علامة مائة 60 جنيهاً للسادة الزملاء

★ Arrange the following in ascending order:

93

17

18

86

91

54

53

28

91

32

97

45

81

42

59

61

42

84

45

13

92

34

82

13

34

71

52

91

31

52

01022744086

91

أ / أيمن جابر كامل

سعر المذكرة بدون اسم أو علامة مائة 60 جنيهاً للسادة الزملاء

★ **Arrange the following in descending order:**

91

11

17

76

81

44

.....

.....

.....

.....

.....

.....

44

61

42

81

21

42

.....

.....

.....

.....

.....

.....

71

32

49

51

32

74

.....

.....

.....

.....

.....

.....

55

23

99

44

92

23

.....

.....

.....

.....

.....

.....

24

91

72

21

51

82

.....

.....

.....

.....

.....

.....

01022744086

92

أ / أيمن جابر كامل

سعر المذكرة بدون اسم أو علامة مائة 60 جنياً للسادة الزملاء

| | | | | | | | | | |
|----|----|----|----|----|----|----|----|----|-----|
| 1 | 2 | 3 | 4 | 5 | 6 | 7 | 8 | 9 | 10 |
| 11 | 12 | 13 | 14 | 15 | 16 | 17 | 18 | 19 | 20 |
| 21 | 22 | 23 | 24 | 25 | 26 | 27 | 28 | 29 | 30 |
| 31 | 32 | 33 | 34 | 35 | 36 | 37 | 38 | 39 | 40 |
| 41 | 42 | 43 | 44 | 45 | 46 | 47 | 48 | 49 | 50 |
| 51 | 52 | 53 | 54 | 55 | 56 | 57 | 58 | 59 | 60 |
| 61 | 62 | 63 | 64 | 65 | 66 | 67 | 68 | 69 | 70 |
| 71 | 72 | 73 | 74 | 75 | 76 | 77 | 78 | 79 | 80 |
| 81 | 82 | 83 | 84 | 85 | 86 | 87 | 88 | 89 | 90 |
| 91 | 92 | 93 | 94 | 95 | 96 | 97 | 98 | 99 | 100 |

★ Look, read and write:

| | | | | | | | | | |
|-------|-------|-------|-------|-------|-------|-------|-------|-------|-------|
| 21 | 22 | 23 | 24 | 25 | 26 | 27 | 28 | 29 | 30 |
| | | | | | | | | | |
| | | | | | | | | | |

| | | | | | | | | | |
|-------|-------|-------|-------|-------|-------|-------|-------|-------|-------|
| 31 | 32 | 33 | 34 | 35 | 36 | 37 | 38 | 39 | 40 |
| | | | | | | | | | |
| | | | | | | | | | |
| | | | | | | | | | |

01022744086

أ / أيمن جابر كامل

سعر المذكرة بدون اسم أو علامة مائة 60 جنيهاً للسادة الزملاء

| | | | | | | | | | |
|-------|-------|-------|-------|-------|-------|-------|-------|-------|-------|
| 41 | 42 | 43 | 44 | 45 | 46 | 47 | 48 | 49 | 50 |
| | | | | | | | | | |
| | | | | | | | | | |
| 51 | 52 | 53 | 54 | 55 | 56 | 57 | 58 | 59 | 60 |
| | | | | | | | | | |
| | | | | | | | | | |
| 61 | 62 | 63 | 64 | 65 | 66 | 67 | 68 | 69 | 70 |
| | | | | | | | | | |
| | | | | | | | | | |
| 71 | 72 | 73 | 74 | 75 | 76 | 77 | 78 | 79 | 80 |
| | | | | | | | | | |
| | | | | | | | | | |
| 81 | 82 | 83 | 84 | 85 | 86 | 87 | 88 | 89 | 90 |
| | | | | | | | | | |
| | | | | | | | | | |

01022744086

سعر المذكرة بدون اسم أو علامة مائة 60 جنيهاً للسادة الزملاء

| | | | | | | | | | |
|-------|-------|-------|-------|-------|-------|-------|-------|-------|-------|
| 91 | 92 | 93 | 94 | 95 | 96 | 97 | 98 | 99 | 100 |
| | | | | | | | | | |
| | | | | | | | | | |

★ Complete in the same pattern:

| | | | | | | | | | |
|----|--|--|----|----|----|----|----|--|-----|
| 40 | | | 43 | | | | | | |
| 51 | | | | 55 | | | | | 60 |
| 61 | | | | | | | 68 | | 70 |
| 71 | | | 74 | | | | | | 80 |
| 81 | | | | | | 87 | | | 90 |
| 91 | | | | 95 | | | | | 100 |
| 20 | | | | | 25 | | | | 29 |
| 30 | | | 33 | | | | | | 39 |
| 40 | | | | 44 | | | | | 49 |
| 50 | | | | | 55 | | | | 59 |

01022744086

سعر المذكرة بدون اسم أو علامة مائة 60 جنيهاً للسادة الزملاء

| | | | | | | | | | |
|----|----|----|--|----|----|--|--|--|----|
| 60 | | 62 | | | | | | | 69 |
| 70 | | | | | 75 | | | | 79 |
| 80 | | | | 84 | | | | | 89 |
| 90 | 92 | | | | | | | | 99 |

★ Read, think and complete:

| | | | | | |
|----|---|----|----|---|----|
| | > | 40 | | > | 45 |
| | < | 70 | | < | 77 |
| 90 | > | | 95 | > | |
| 11 | = | | 13 | = | |
| 97 | > | | 19 | > | |
| 15 | = | | 81 | = | |

01022744086

96

أ / أيمن جابر كامل

سعر المذكرة بدون اسم أو علامة مائبة 60 جنيهاً للسادة الزملاء


★ **Read, think and complete using (>), (<) or (=):**

| | | | | | | | | |
|----|--|----|----|--|----|----|--|----|
| 27 | | 60 | 29 | | 60 | 17 | | 60 |
| 28 | | 50 | 22 | | 50 | 38 | | 50 |
| 29 | | 40 | 27 | | 40 | 49 | | 40 |
| 12 | | 30 | 14 | | 30 | 32 | | 30 |
| 13 | | 20 | 15 | | 20 | 23 | | 20 |
| 14 | | 10 | 16 | | 10 | 34 | | 10 |
| 40 | | 91 | 42 | | 91 | 20 | | 91 |
| 17 | | 81 | 19 | | 81 | 15 | | 81 |
| 15 | | 71 | 17 | | 71 | 25 | | 71 |
| 16 | | 51 | 18 | | 51 | 26 | | 51 |
| 18 | | 61 | 19 | | 61 | 28 | | 61 |
| 19 | | 41 | 13 | | 41 | 29 | | 41 |
| 90 | | 31 | 92 | | 31 | 80 | | 31 |
| 80 | | 92 | 82 | | 92 | 50 | | 92 |
| 70 | | 70 | 72 | | 70 | 90 | | 70 |
| 50 | | 72 | 52 | | 72 | 30 | | 72 |
| 60 | | 62 | 62 | | 62 | 10 | | 62 |


01022744086

سعر المذكرة بدون اسم أو علامة مائبة 60 جنيهاً للسادة الزملاء

★ **Subtract as in the example:**



$$90 - 10 = 80$$



$$80 - 10 =$$



$$70 - 10 =$$



$$60 - 10 =$$


$$50 - 10 =$$


$$40 - 10 =$$


$$30 - 10 =$$


$$20 - 10 =$$


$$10 - 10 =$$


01022744086


أ / أيمن جابر كامل


سعر المذكرة بدون اسم أو علامة مائبة 60 جنيهاً للسادة الزملاء


★ Add as in the example:



$$90 + 10 = 100$$


$$80 + 10 =$$



$$70 + 10 =$$



$$60 + 10 =$$


$$50 + 10 =$$


$$40 + 10 =$$


$$30 + 10 =$$


$$20 + 10 =$$


$$10 + 10 =$$

01022744086

سعر المذكرة بدون اسم أو علامة مائية 60 جنيهاً للسادة الزملاء

★ **Subtract as in the example:**

$99 - 1 = 98$

$98 - 1 = \dots$

$97 - 1 = \dots$

$96 - 1 = \dots$

$95 - 1 = \dots$

$94 - 1 = \dots$

$93 - 1 = \dots$

$92 - 1 = \dots$

$91 - 1 = \dots$

$90 - 1 = \dots$

$79 - 1 = \dots$

$78 - 1 = \dots$

$77 - 1 = \dots$

$76 - 1 = \dots$

$75 - 1 = \dots$

$74 - 1 = \dots$

$73 - 1 = \dots$

$72 - 1 = \dots$

$71 - 1 = \dots$

$70 - 1 = \dots$

$59 - 1 = \dots$

$58 - 1 = \dots$

$57 - 1 = \dots$

$56 - 1 = \dots$

$55 - 1 = \dots$

$54 - 1 = \dots$

$53 - 1 = \dots$

$52 - 1 = \dots$

$51 - 1 = \dots$

$50 - 1 = \dots$

$89 - 1 = \dots$

$88 - 1 = \dots$

$87 - 1 = \dots$

$86 - 1 = \dots$

$85 - 1 = \dots$

$84 - 1 = \dots$

$83 - 1 = \dots$

$82 - 1 = \dots$

$81 - 1 = \dots$

$80 - 1 = \dots$

$69 - 1 = \dots$

$68 - 1 = \dots$

$67 - 1 = \dots$

$66 - 1 = \dots$

$65 - 1 = \dots$

$64 - 1 = \dots$

$63 - 1 = \dots$

$62 - 1 = \dots$

$61 - 1 = \dots$

$60 - 1 = \dots$

$49 - 1 = \dots$

$48 - 1 = \dots$

$47 - 1 = \dots$

$46 - 1 = \dots$

$45 - 1 = \dots$

$44 - 1 = \dots$

$43 - 1 = \dots$

$42 - 1 = \dots$

$41 - 1 = \dots$

$40 - 1 = \dots$

01022744086

100

أ / أيمن جابر كامل